

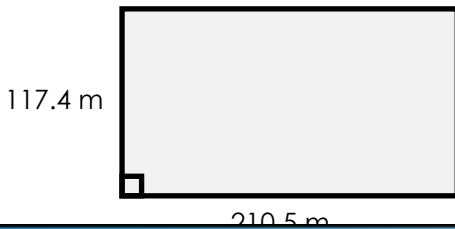
Name: _____

Area of a Parallelogram

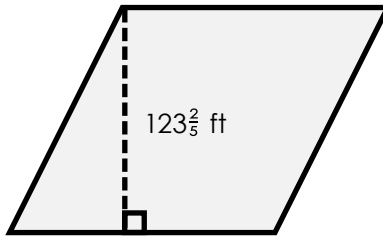
Formula: $A = b \times h$

Find the area of each parallelogram.

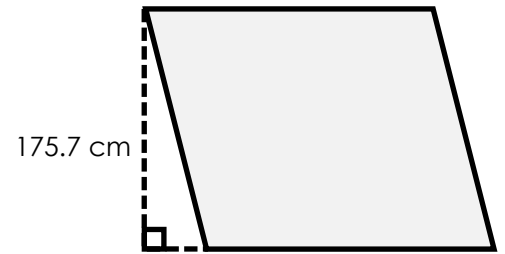
a.



b.




c.



Preview

Please log in to download the printable version of this worksheet.

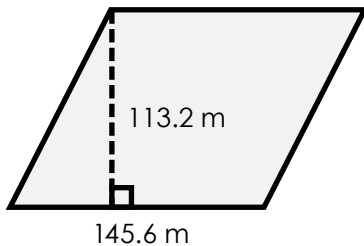


area = _____

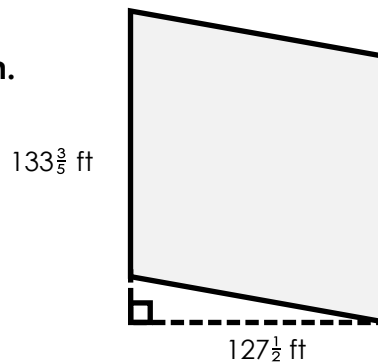
area = _____

area = _____

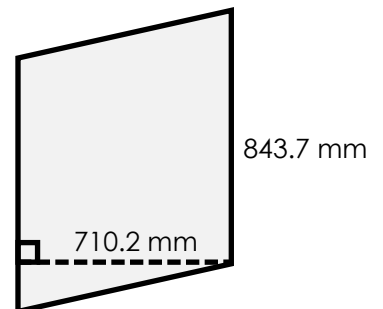
g.



h.



i.



area = _____

area = _____


area = _____

Area of a Parallelogram

Formula: $A = b \times h$

Find the area of each parallelogram.

a.



117.4 m

b.



123 $\frac{1}{2}$ ft

c.



175.7 m

Preview

Please log in to download
the printable version of this worksheet.

