

1.

## Adding Money

$$\begin{array}{r} \$3.48 \\ + 2.18 \\ \hline \end{array}$$

2.

## Adding Money

Find the sum of \$5.63 and \$4.09.



# Preview

Please log in to download the printable version of this worksheet.

$$\$2.96 + \$0.85.$$

Find the sum of the numbers in the hexagons.



5.

## Adding Money

$$\begin{array}{r} \$4.36 \\ + 8.47 \\ \hline \end{array}$$

6.

## Adding Money

Find the sum of \$6.27 and \$3.99.

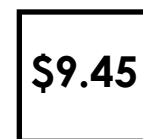


# Preview

Please log in to download the printable version of this worksheet.

$$\$7.06 + \$5.53.$$

Find the sum of the numbers in the squares.



9.

## Adding Money

$$\begin{array}{r} \$1.86 \\ + 0.87 \\ \hline \end{array}$$

10.

## Adding Money

Find the sum of \$3.64 and \$0.97.



# Preview

Please log in to download the printable version of this worksheet.

$$\$0.43 + \$6.56.$$

Find the sum of the numbers in the circles.



13.

## Adding Money

$$\begin{array}{r} \$4.89 \\ + 9.92 \\ \hline \end{array}$$

14.

## Adding Money

Find the sum of \$2.06 and \$6.55.



# Preview

Please log in to download the printable version of this worksheet.

$$\$5.85 + \$4.55.$$

Find the sum of the numbers in the triangles.



17.

## Adding Money

$$\begin{array}{r} \$8.76 \\ + 8.77 \\ \hline \end{array}$$

18.

## Adding Money

Find the sum of \$5.77 and \$4.90.



# Preview

Please log in to download the printable version of this worksheet.

$$\$1.87 + \$0.81.$$

Find the sum of the numbers in the pentagons.



21.

## Adding Money

$$\begin{array}{r} \$0.19 \\ + 0.39 \\ \hline \end{array}$$

22.

## Adding Money

Find the sum of \$2.22 and \$8.79.

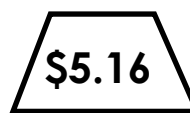


# Preview

Please log in to download the printable version of this worksheet.

$$\$3.00 + \$9.54.$$

Find the sum of the numbers in the trapezoids.



25.

## Adding Money

$$\begin{array}{r} \$9.99 \\ + 9.99 \\ \hline \end{array}$$

26.

## Adding Money

Find the sum of \$2.56 and \$1.28.

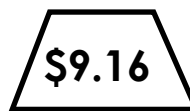


# Preview

Please log in to download the printable version of this worksheet.

$$\$0.08 + \$9.96.$$

Find the sum of the numbers in the hexagons.



29.

Adding  
Money

30.

Adding  
Money



# Preview

Please log in to download  
the printable version of this worksheet.



Name: \_\_\_\_\_

## Task Cards: Adding Money

1.

2.

3.

4.

5.

# Preview

Please log in to download  
the printable version of this worksheet.



Name: \_\_\_\_\_

## Task Cards: Adding Money

16.

17.

18.

19.

20.

# Preview

Please log in to download  
the printable version of this worksheet.



# ANSWER KEY

## Task Cards: Adding Money

①	②	③	④	⑤
$\begin{array}{r} \$ 3.48 \\ + 2.18 \\ \hline \$ 5.66 \end{array}$	$\begin{array}{r} \$ 5.63 \\ + 4.09 \\ \hline \$ 9.72 \end{array}$	$\begin{array}{r} \$ 2.96 \\ + 0.85 \\ \hline \$ 3.81 \end{array}$	$\begin{array}{r} \$ 8.82 \\ + 2.88 \\ \hline \$ 11.70 \end{array}$	$\begin{array}{r} \$ 4.36 \\ + 8.47 \\ \hline \$ 12.83 \end{array}$

# Preview

Please log in to download  
the printable version of this worksheet.



$\begin{array}{r} \$ 2.56 \\ + 1.28 \\ \hline \$ 3.84 \end{array}$	$\begin{array}{r} \$ 0.08 \\ + 9.96 \\ \hline \$ 10.04 \end{array}$	$\begin{array}{r} \$ 1.46 \\ + 6.15 \\ \hline \$ 7.61 \end{array}$	$\begin{array}{r} \$ 6.15 \\ + 1.46 \\ \hline \$ 7.61 \end{array}$	$\begin{array}{r} \$ 5.87 \\ + 8.07 \\ \hline \$ 13.94 \end{array}$
--	---	--	--	---

# Task Cards: Adding Money

This file contains 30 Addition task cards.  
All cards have addition money problems.

There are countless ways to use task cards in your classroom.

# Preview

Please log in to download  
the printable version of this worksheet.



## 7. Extra Help

Have a parent, friend, or volunteer sit with individual students who need extra help. They can practice by solving the problems on the task cards together.