


Name: \_\_\_\_\_

Time: Nearest Minute  
(No Numbers on the Clock Face)

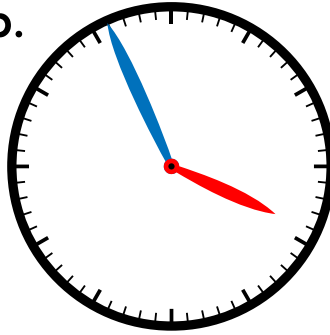
# Telling Time

Write the time shown on each clock.

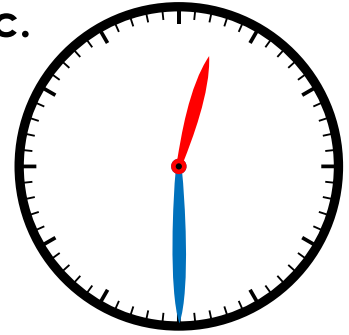
a.



b.



c.



# Preview

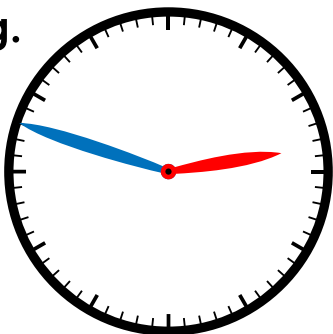
Please log in to download  
the printable version of this worksheet.

\_\_\_\_\_ : \_\_\_\_\_

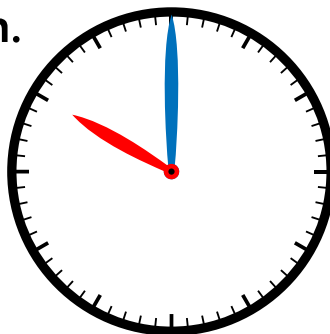
\_\_\_\_\_ : \_\_\_\_\_

\_\_\_\_\_ : \_\_\_\_\_

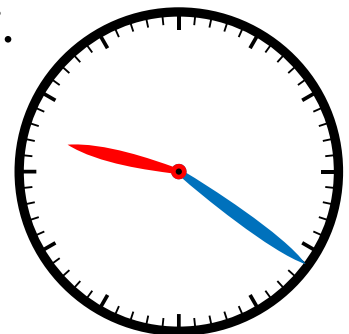
g.



h.



i.



\_\_\_\_\_ : \_\_\_\_\_

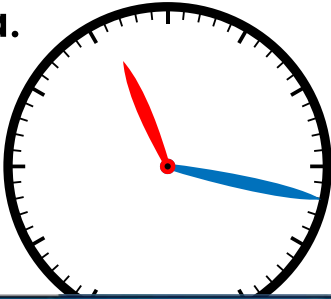
\_\_\_\_\_ : \_\_\_\_\_

\_\_\_\_\_ : \_\_\_\_\_

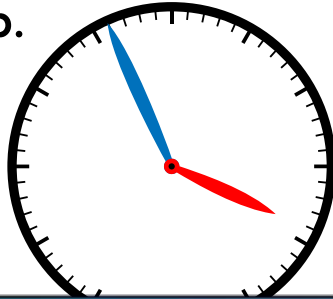
## Telling Time

Write the time shown on each clock.

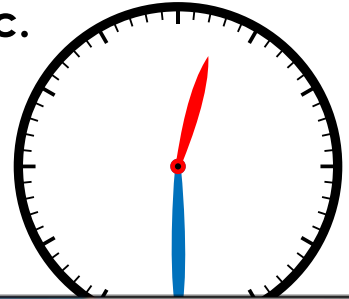
a.



b.



c.



# Preview

Please log in to download  
the printable version of this worksheet.

