

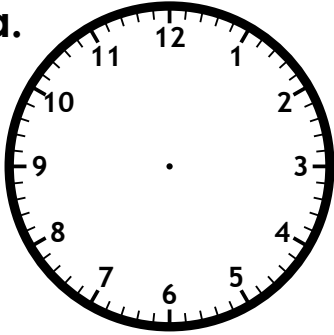
Name: \_\_\_\_\_

Time: Nearest 5 Minutes

# Telling Time

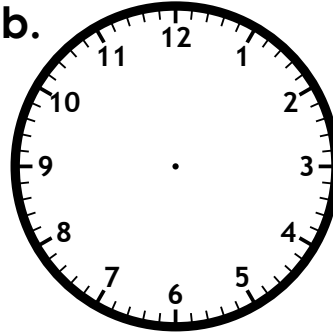
Draw the hands on the clocks to show the given time.  
Be sure the hour hand is shorter than the minute hand.

a.



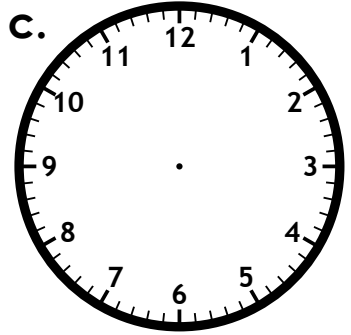
6:10

b.



4:25

c.



12:40



# ~ PREVIEW ~

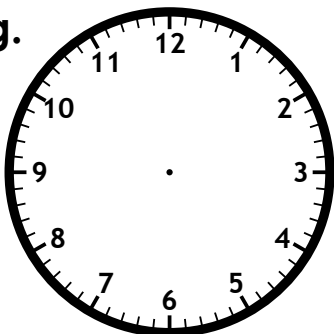
Please log in or register to download  
the printable version of this worksheet.

5:30

7:50

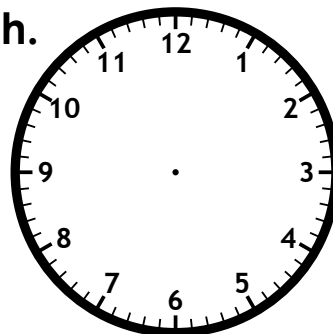
11:05

g.



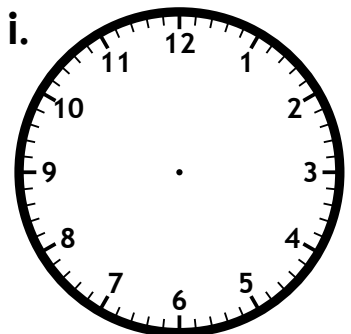
2:15

h.



3:20

i.



8:55

## Telling Time

Draw the hands on the clocks to show the given time.  
Be sure the hour hand is shorter than the minute hand.



# ~ PREVIEW ~

Please log in or register to download  
the printable version of this worksheet.



2:15



3:20



8:55