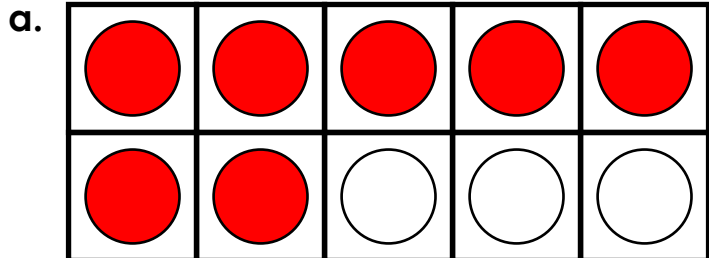


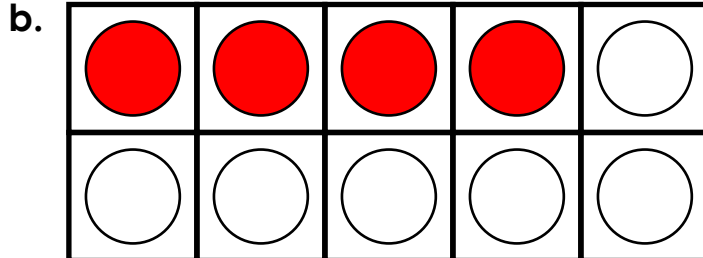
Name: _____

Ten Frames

Write the addition and subtraction problems for each.



$$\underline{7} + \underline{3} = \underline{10}$$

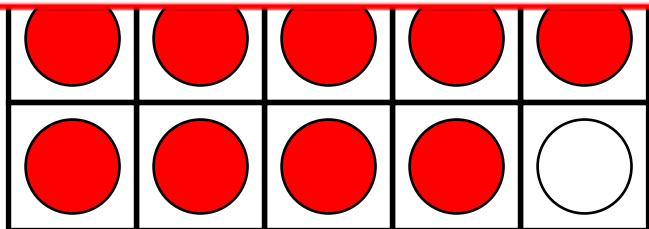


$$\underline{\quad} + \underline{\quad} = \underline{\quad}$$



~ PREVIEW ~

Please log in or register to download the printable version of this worksheet.

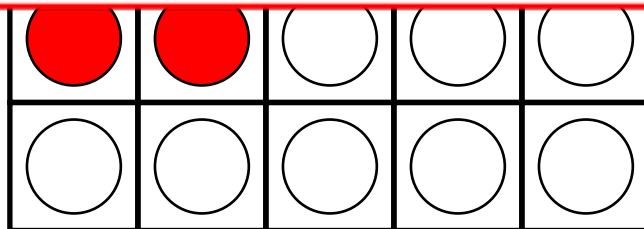


$$\underline{\quad} + \underline{\quad} = \underline{\quad}$$

$$\underline{\quad} + \underline{\quad} = \underline{\quad}$$

$$\underline{\quad} - \underline{\quad} = \underline{\quad}$$

$$\underline{\quad} - \underline{\quad} = \underline{\quad}$$



$$\underline{\quad} + \underline{\quad} = \underline{\quad}$$

$$\underline{\quad} + \underline{\quad} = \underline{\quad}$$

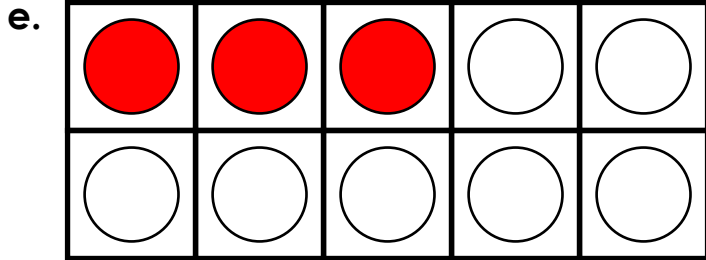
$$\underline{\quad} - \underline{\quad} = \underline{\quad}$$

$$\underline{\quad} - \underline{\quad} = \underline{\quad}$$

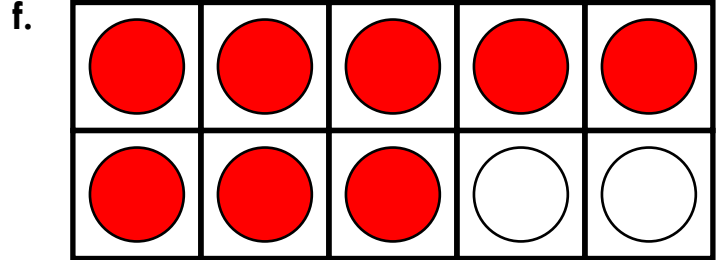
Name: _____

Ten Frames

Write the addition and subtraction problems for each.



$$\underline{\quad} + \underline{\quad} = \underline{\quad}$$

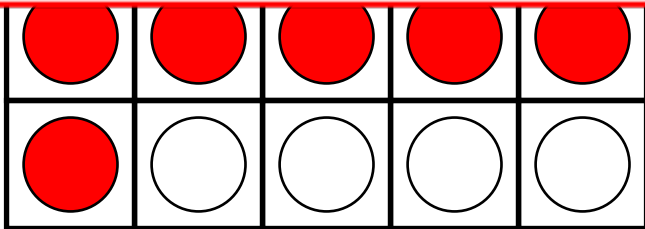


$$\underline{\quad} + \underline{\quad} = \underline{\quad}$$



~ PREVIEW ~

Please log in or register to download the printable version of this worksheet.

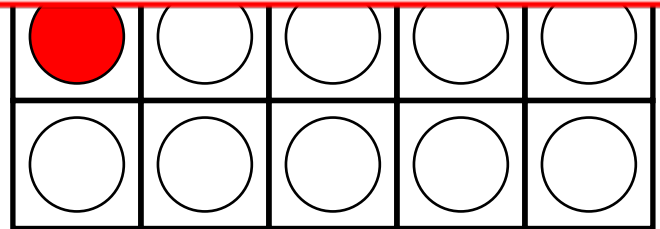


$$\underline{\quad} + \underline{\quad} = \underline{\quad}$$

$$\underline{\quad} + \underline{\quad} = \underline{\quad}$$

$$\underline{\quad} - \underline{\quad} = \underline{\quad}$$

$$\underline{\quad} - \underline{\quad} = \underline{\quad}$$



$$\underline{\quad} + \underline{\quad} = \underline{\quad}$$

$$\underline{\quad} + \underline{\quad} = \underline{\quad}$$

$$\underline{\quad} - \underline{\quad} = \underline{\quad}$$

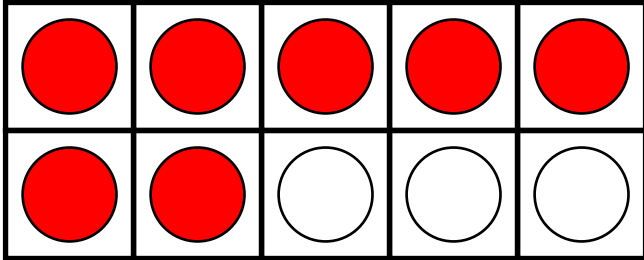
$$\underline{\quad} - \underline{\quad} = \underline{\quad}$$

ANSWER KEY

Ten Frames

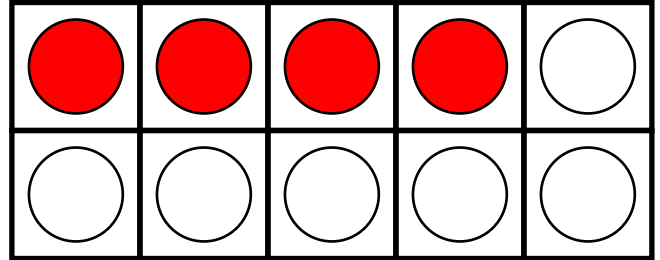
Write the addition and subtraction problems for each.

a.



$$\underline{7} + \underline{3} = \underline{10}$$

b.

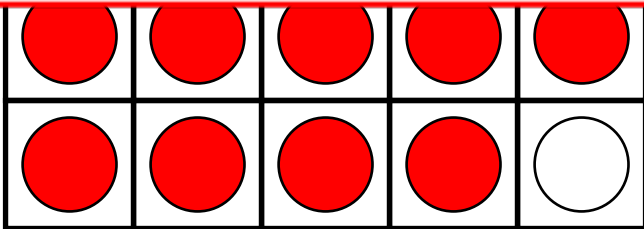


$$\underline{4} + \underline{6} = \underline{10}$$



~ PREVIEW ~

Please log in or register to download the printable version of this worksheet.

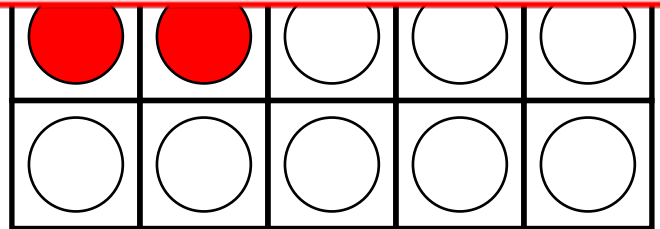


$$\underline{9} + \underline{1} = \underline{10}$$

$$\underline{1} + \underline{9} = \underline{10}$$

$$\underline{10} - \underline{1} = \underline{9}$$

$$\underline{10} - \underline{9} = \underline{1}$$



$$\underline{2} + \underline{8} = \underline{10}$$

$$\underline{8} + \underline{2} = \underline{10}$$

$$\underline{10} - \underline{8} = \underline{2}$$

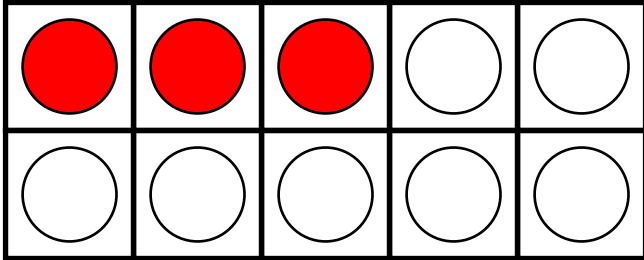
$$\underline{10} - \underline{2} = \underline{8}$$

ANSWER KEY

Ten Frames

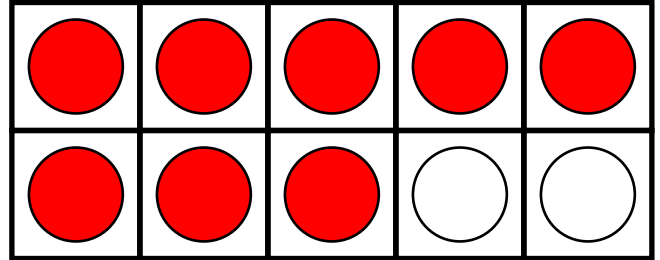
Write the addition and subtraction problems for each.

e.



$$\underline{3} + \underline{7} = \underline{10}$$

f.

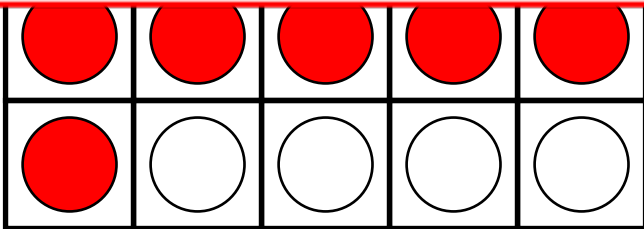


$$\underline{8} + \underline{2} = \underline{10}$$



~ PREVIEW ~

Please log in or register to download the printable version of this worksheet.

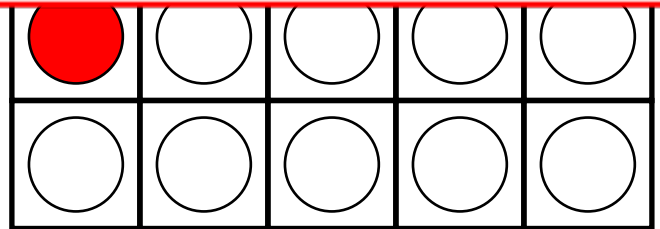


$$\underline{6} + \underline{4} = \underline{10}$$

$$\underline{4} + \underline{6} = \underline{10}$$

$$\underline{10} - \underline{4} = \underline{6}$$

$$\underline{10} - \underline{6} = \underline{4}$$



$$\underline{1} + \underline{9} = \underline{10}$$

$$\underline{9} + \underline{1} = \underline{10}$$

$$\underline{10} - \underline{9} = \underline{1}$$

$$\underline{10} - \underline{1} = \underline{9}$$