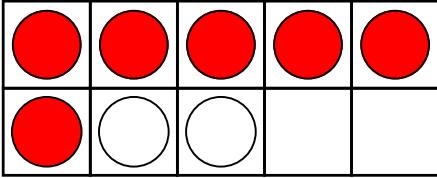


Name: _____

Adding With Ten-Frames

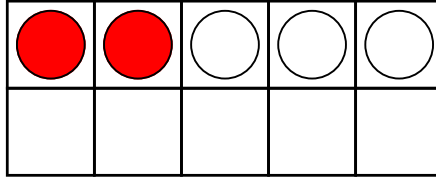
Write the math fact shown by each ten-frame.

a.



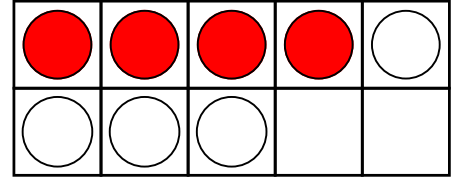
$$\underline{6} + \underline{2} = \underline{8}$$

b.



$$\underline{\quad} + \underline{\quad} = \underline{\quad}$$

c.



$$\underline{\quad} + \underline{\quad} = \underline{\quad}$$


d.



e.

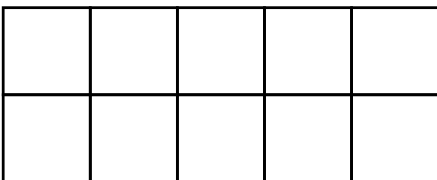


f.

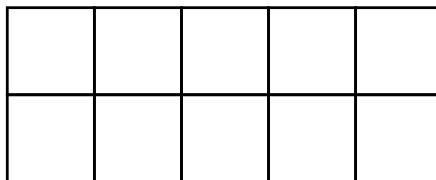


Preview

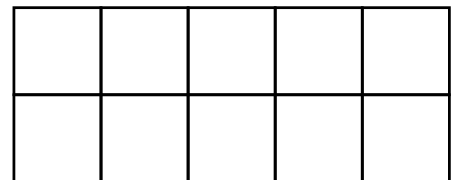
Please log in to download
the printable version of this worksheet.



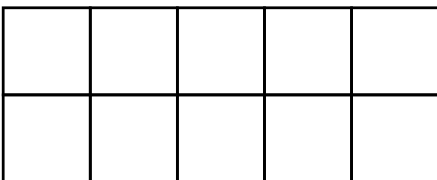
$$3 + 3 = \underline{\quad}$$



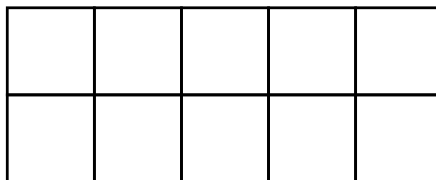
$$5 + 3 = \underline{\quad}$$



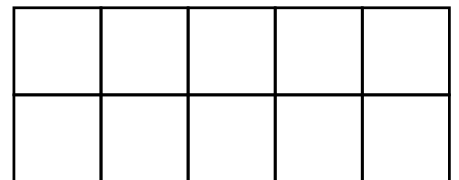
$$1 + 0 = \underline{\quad}$$



$$7 + 3 = \underline{\quad}$$



$$4 + 2 = \underline{\quad}$$

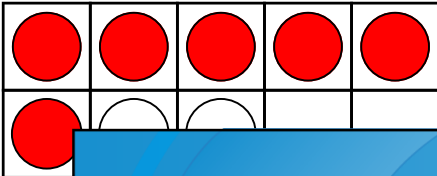


$$4 + 6 = \underline{\quad}$$

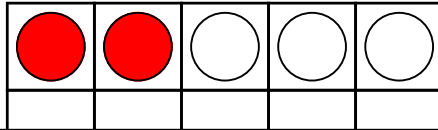
Adding With Ten-Frames

Write the math fact shown by each ten-frame.

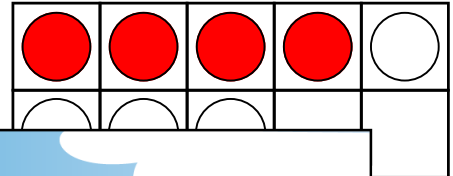
a.




b.



c.

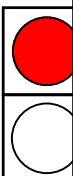


d.



7

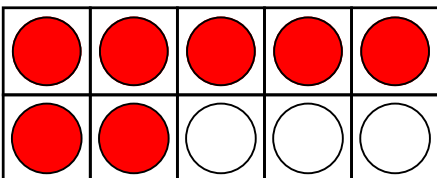
Com



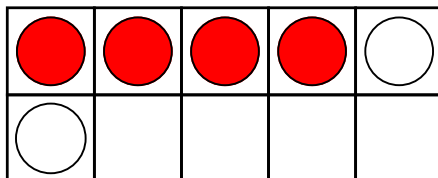
3

Preview

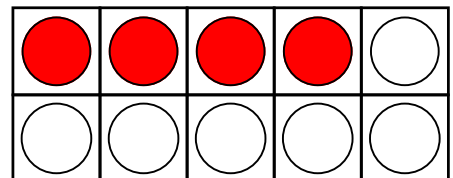
Please log in to download
the printable version of this worksheet.



$$7 + 3 = \underline{10}$$



$$4 + 2 = \underline{6}$$



$$4 + 6 = \underline{10}$$