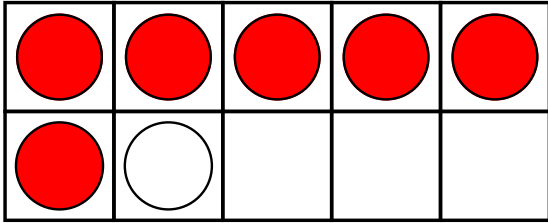


Name: \_\_\_\_\_

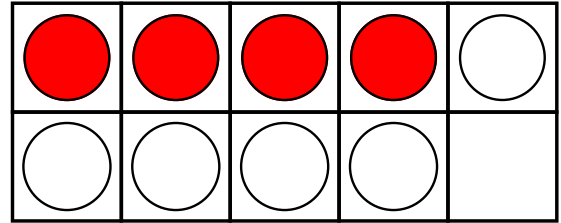
## Adding With Ten-Frames

Circle the correct math fact shown by each ten-frame.



$6 + 6 = 12$

$4 + 1 = 7$



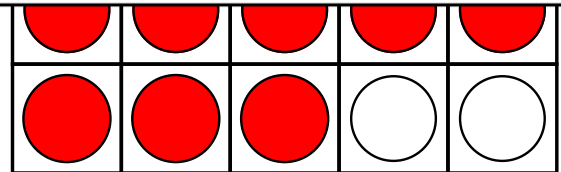
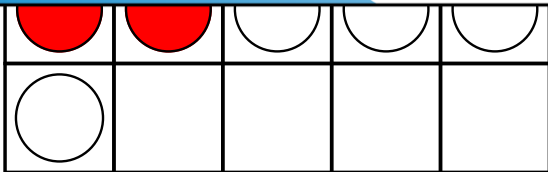
$4 + 10 = 14$

$4 + 4 = 8$

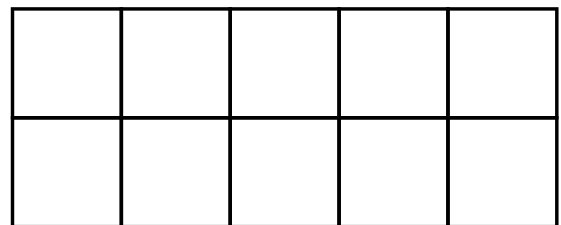


# Preview

Please log in to download  
the printable version of this worksheet.

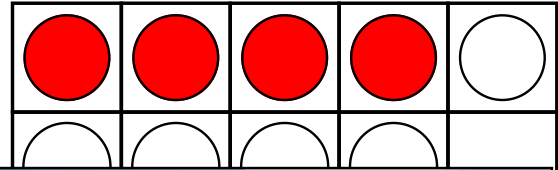
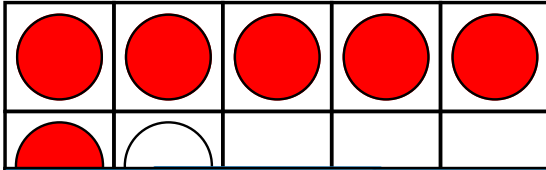


Draw **3** gray counters.  
Draw **4** white counters.  
Write an addition fact to  
show how many in all.



## Adding With Ten-Frames

Circle the correct math fact shown by each ten-frame.



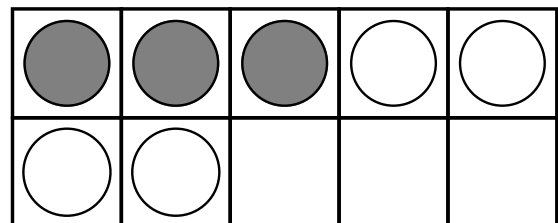
# Preview

Please log in to download  
the printable version of this worksheet.



Write

Draw **3** gray counters.  
Draw **4** white counters.  
Write an addition fact to  
show how many in all.



$$3 + 4 = 7$$