


Adding With a Ten Frame

Adding With a Ten Frame

Draw 7 green counters.
Draw 3 orange counters.

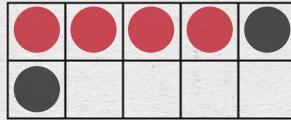


$$\begin{array}{r} 7 \\ + 3 \\ \hline \end{array} = \begin{array}{r} 10 \\ \hline \end{array}$$

How many counters in all? 10

Adding With a Ten Frame

Draw 4 red counters.
Draw 2 black counters.



$$\begin{array}{r} 4 \\ + 2 \\ \hline \end{array} = \begin{array}{r} 6 \\ \hline \end{array}$$

How many counters in all? 6


Adding With a Ten Frame

Draw 2 purple counters.
Draw 1 blue counter.



$$\begin{array}{r} 2 \\ + 1 \\ \hline \end{array} = \begin{array}{r} 3 \\ \hline \end{array}$$

How many counters in all? 3



Preview

Please log in to download
the printable version of this worksheet.

Adding With a Ten Frame

Draw 7 green counters.
Draw 3 orange counters.



$$\begin{array}{r} _ \\ + _ \\ \hline \end{array} = \begin{array}{r} _ \\ \hline \end{array}$$

How many counters in all?

Adding With a Ten Frame

Draw 7 green counters.
Draw 3 orange counters.



$$\begin{array}{r} _ \\ + _ \\ \hline \end{array} = \begin{array}{r} _ \\ \hline \end{array}$$

How many counters in all?

Adding With a Ten Frame

Draw 7 green counters.
Draw 3 orange counters.



$$\begin{array}{r} _ \\ + _ \\ \hline \end{array} = \begin{array}{r} _ \\ \hline \end{array}$$

How many counters in all?

glue



Fold along this line.

Adding With a Ten Frame

Draw 7 green counters.

Draw 3 orange counters.




Preview

Please log in to download
the printable version of this worksheet.

$$\underline{\quad} + \underline{\quad} = \underline{\quad}$$

How many counters in all?





Fold along this line.

Adding With a Ten Frame

Draw 4 red counters.

Draw 2 black counters.




Preview

Please log in to download
the printable version of this worksheet.

$$\underline{\quad} + \underline{\quad} = \underline{\quad}$$

How many counters in all?





Fold along this line.

Adding With a Ten Frame

Draw 2 purple counters.

Draw 1 blue counter.




Preview

Please log in to download
the printable version of this worksheet.

$$\underline{\quad} + \underline{\quad} = \underline{\quad}$$

How many counters in all?





Fold along this line.

Adding With a Ten Frame

Draw 3 black counters.

Draw 2 yellow counters.




Preview

Please log in to download
the printable version of this worksheet.

$$\underline{\quad} + \underline{\quad} = \underline{\quad}$$

How many counters in all?





Fold along this line.

Adding With a Ten Frame

Draw 6 brown counters.

Draw 3 red counters.




Preview

Please log in to download
the printable version of this worksheet.

$$\underline{\quad} + \underline{\quad} = \underline{\quad}$$

How many counters in all?





Fold along this line.

Adding With a Ten Frame

Draw 4 blue counters.

Draw 4 black counters.




Preview

Please log in to download
the printable version of this worksheet.

$$\underline{\quad} + \underline{\quad} = \underline{\quad}$$

How many counters in all?





Fold along this line.

Adding With a Ten Frame

Draw 6 orange counters.

Draw 1 yellow counter.




Preview

Please log in to download
the printable version of this worksheet.

$$\underline{\quad} + \underline{\quad} = \underline{\quad}$$

How many counters in all?





Fold along this line.

Adding With a Ten Frame

Draw 2 red counters.

Draw 4 brown counters.




Preview

Please log in to download
the printable version of this worksheet.

$$\underline{\quad} + \underline{\quad} = \underline{\quad}$$

How many counters in all?





Fold along this line.

Adding With a Ten Frame

Draw 3 black counters.

Draw 3 green counters.




Preview

Please log in to download
the printable version of this worksheet.

$$\underline{\quad} + \underline{\quad} = \underline{\quad}$$

How many counters in all?





Fold along this line.

Adding With a Ten Frame

Draw 1 yellow counter.

Draw 1 purple counter.




Preview

Please log in to download
the printable version of this worksheet.

$$\underline{\quad} + \underline{\quad} = \underline{\quad}$$

How many counters in all?





Fold along this line.

Adding With a Ten Frame

Draw 5 orange counters.

Draw 4 black counters.




Preview

Please log in to download
the printable version of this worksheet.

$$\underline{\quad} + \underline{\quad} = \underline{\quad}$$

How many counters in all?






Fold along this line.

Adding With a Ten Frame

Draw 4 green counters.

Draw 3 blue counters.




Preview

Please log in to download
the printable version of this worksheet.

$$\underline{\quad} + \underline{\quad} = \underline{\quad}$$

How many counters in all?





Fold along this line.

Adding With a Ten Frame

Draw 2 red counters.

Draw 2 yellow counters.




Preview

Please log in to download
the printable version of this worksheet.

$$\underline{\quad} + \underline{\quad} = \underline{\quad}$$

How many counters in all?





Fold along this line.

Adding With a Ten Frame

Draw 9 purple counters.

Draw 1 orange counter.




Preview

Please log in to download
the printable version of this worksheet.

$$\underline{\quad} + \underline{\quad} = \underline{\quad}$$

How many counters in all?





Fold along this line.

Adding With a Ten Frame

Draw 7 yellow counters.

Draw 2 brown counters.



Preview

Please log in to download
the printable version of this worksheet.

$$\underline{\quad} + \underline{\quad} = \underline{\quad}$$

How many counters in all?

