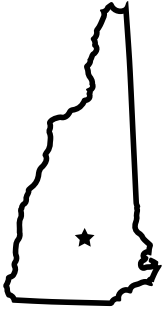


Name: _____

Name the Northeastern Region States

Write the name and capital for each state.



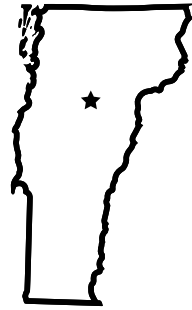
State: _____

Capital: _____



State: _____

Capital: _____



State: _____

Capital: _____



Preview

Please log in to download
the printable version of this worksheet.

State: _____


Capital: _____

State: _____

Capital: _____

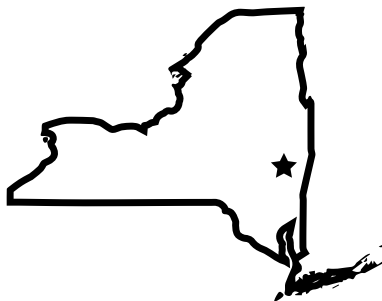
State: _____

Capital: _____



State: _____

Capital: _____



State: _____

Capital: _____



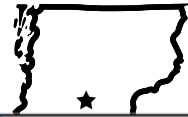
State: _____

Capital: _____

ANSWER KEY

Name the Northeastern Region States

Write the name and capital for each state.



Preview

Please log in to download
the printable version of this worksheet.



State: Pennsylvania

Capital: Harrisburg

State: New York

Capital: Albany

State: New Jersey

Capital: Trenton