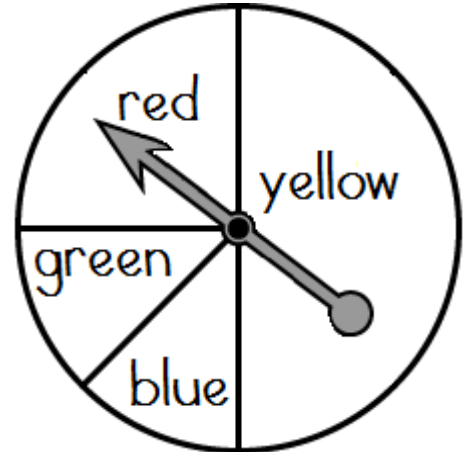


Name: \_\_\_\_\_

# Probability

1. What is the probability of the spinner landing on yellow? \_\_\_\_\_
2. What is the probability of the spinner landing on green? \_\_\_\_\_
3. What is the probability of the spinner landing on red? \_\_\_\_\_
4. What is the probability of **not** spinning blue? \_\_\_\_\_
5. Ann says if you spin the spinner 80 times, it should land on red about 10 times. Do you agree with her? Explain.






## Preview

Please log in to download the printable version of this worksheet.

6. What is the probability of the spinner **not** landing on a heart? \_\_\_\_\_
7. What is the probability of the spinner **not** landing on a heart? \_\_\_\_\_
8. What is the probability of the spinner landing on a diamond or spade? \_\_\_\_\_
9. Do you have an equal chance of landing on any given symbol? Explain.



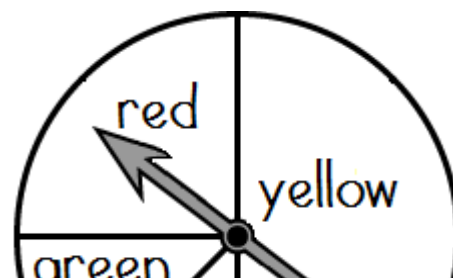
\_\_\_\_\_

\_\_\_\_\_

## ANSWER KEY

### Probability

1. What is the probability of the spinner landing on yellow? **1 out of 2**
2. What is the probability of the spinner landing on green? **1 out of 8**



**Preview**

Please log in to download  
the printable version of this worksheet.

