

Name: _____

Cinco de Mayo Multiplication Arrays


Write the multiplication fact shown by each array.

example



$$2 \times 5 = 10$$

a.



b.



c.



d.





e.




Preview


Please log in to download the printable version of this worksheet.




i.



j.



k.



ANSWER KEY


Cinco de Mayo Multiplication Arrays

Write the multiplication fact shown by each array.


example



$$2 \times 5 = 10$$



$$3 \times 5 = 15$$




$$5 \times 10 = 50$$




Preview

Please log in to download
the printable version of this worksheet.




$$5 \times 5 = 25$$




$$5 \times 4 = 20$$




$$5 \times 8 = 40$$



$$2 \times 5 = 10$$



$$5 \times 9 = 45$$



$$6 \times 5 = 30$$