

Name: \_\_\_\_\_



# Multiplication Arrays

Write the multiplication fact shown by each array.

example








$$2 \times 5 = 10$$



# ~ PREVIEW ~

Please log in or register to download the printable version of this worksheet.



# ANSWER KEY


## Multiplication Arrays

Write the multiplication fact shown by each array.


example



$$\underline{2 \times 5 = 10}$$



$$\underline{5 \times 7 = 35}$$



$$\underline{4 \times 9 = 36}$$



# ~ PREVIEW ~

Please log in or register to download  
the printable version of this worksheet.