

Name: _____

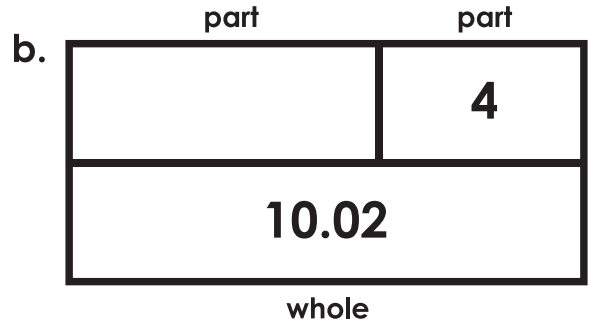
Decimal Operations with Bar Models

Find the missing value for each bar model. Then write an addition and subtraction number sentence for each.



$$\underline{\quad\quad} + \underline{\quad\quad} = \underline{\quad\quad}$$

$$\underline{\quad\quad} - \underline{\quad\quad} = \underline{\quad\quad}$$



$$\underline{\quad\quad} + \underline{\quad\quad} = \underline{\quad\quad}$$

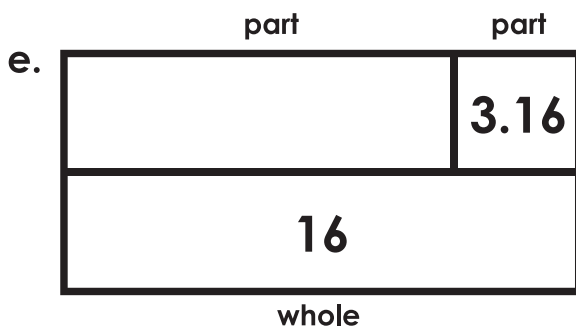
$$\underline{\quad\quad} - \underline{\quad\quad} = \underline{\quad\quad}$$

Preview

*Please log in to download
the printable version of this worksheet.*

$$\underline{\quad\quad} - \underline{\quad\quad} = \underline{\quad\quad}$$

$$\underline{\quad\quad} - \underline{\quad\quad} = \underline{\quad\quad}$$



$$\underline{\quad\quad} + \underline{\quad\quad} = \underline{\quad\quad}$$

$$\underline{\quad\quad} - \underline{\quad\quad} = \underline{\quad\quad}$$

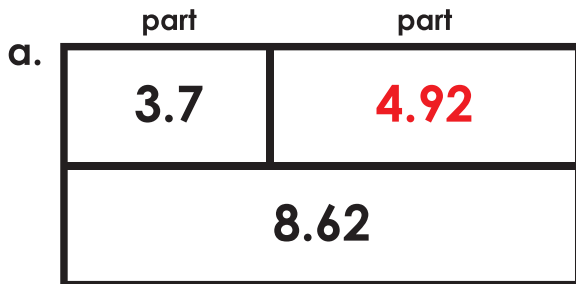


$$\underline{\quad\quad} + \underline{\quad\quad} = \underline{\quad\quad}$$

$$\underline{\quad\quad} - \underline{\quad\quad} = \underline{\quad\quad}$$

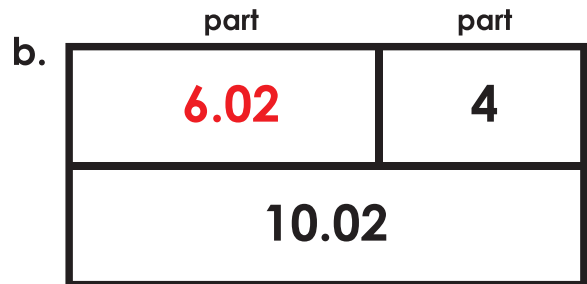
Decimal Operations with Bar Models

Note to teacher: Addition and subtraction number sentences may be reversed.
(example: student may write $8.62 - 3.7 = 4.92$ or $8.62 - 4.92 = 3.7$)



whole

$$\begin{array}{r} 3.7 \\ + 4.92 \\ \hline 8.62 \end{array} = \begin{array}{r} 8.62 \\ - 3.7 \\ \hline 4.92 \end{array}$$



whole

$$\begin{array}{r} 4 \\ + 6.02 \\ \hline 10.02 \end{array} = \begin{array}{r} 10.02 \\ - 4 \\ \hline 6.02 \end{array}$$

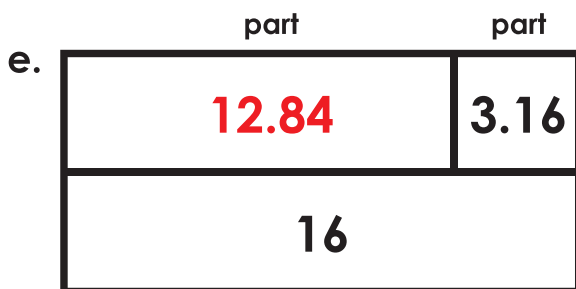


Preview

Please log in to download
the printable version of this worksheet.

$$\begin{array}{r} 8.45 \\ - 2.1 \\ \hline 6.35 \end{array}$$

$$\begin{array}{r} 14.31 \\ - 12.18 \\ \hline 2.13 \end{array}$$



whole

$$\begin{array}{r} 3.16 \\ + 12.84 \\ \hline 16 \end{array} = \begin{array}{r} 16 \\ - 3.16 \\ \hline 12.84 \end{array}$$



part

part

$$\begin{array}{r} 0.7 \\ + 0.89 \\ \hline 1.59 \end{array} = \begin{array}{r} 1.59 \\ - 0.89 \\ \hline 0.7 \end{array}$$