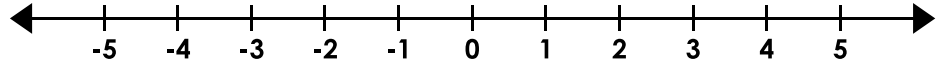


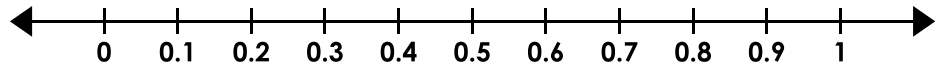
# Inequalities

Graph the inequalities.

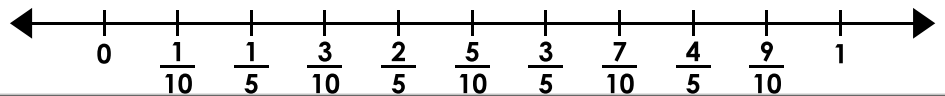
1.  $z \leq 7 - 9$



2.  $e > 0.2 + 0.5$




3.  $\frac{7}{10} - \frac{3}{10} < b$




## Preview

Please log in to download  
the printable version of this worksheet.

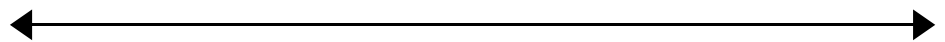
7.  $\frac{11}{16} - \frac{1}{4} < i$



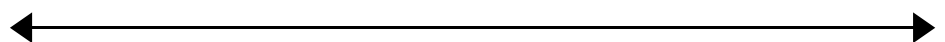
8.  $t \leq 125 + 250$



9.  $y > -87 - 71$



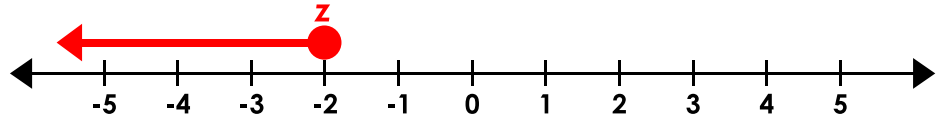
10.  $5.8 + 10.2 \geq g$



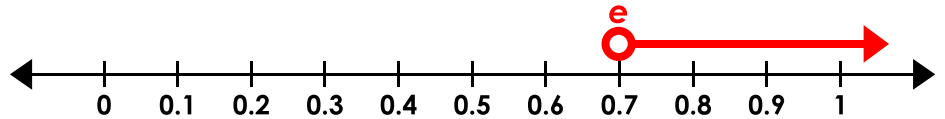
## Inequalities

Graph the inequalities.

1.  $z \leq 7 - 9$



2.  $e > 0.2 + 0.5$



3.  $7 - 3 < b$



# Preview

Please log in to download  
the printable version of this worksheet.



(NOTE: For #10, the scale is unimportant as long as it is on 16, the circle is filled, and the arrow points the correct direction.)