






Name: \_\_\_\_\_

## Birdwatching Pictograph

Pat, Jim, Linda, and Paul went on a bird watching walk.  
The pictograph below shows how many birds each person saw.

**Birdwatching Trip**

Name	Number of Birds Seen
Pat	
Jim	
Linda	
Paul	



# Preview

Please log in to download  
the printable version of this worksheet.





- How many more birds did Paul see than Linda? 4. \_\_\_\_\_
- How many birds did Jim and Pat see together? 5. \_\_\_\_\_
- Did Jim see an odd or even number of birds? 6. \_\_\_\_\_
- Who saw eleven birds? 7. \_\_\_\_\_
- If Jim had seen three more birds, how many symbols would be next to his name on the pictograph? 8. \_\_\_\_\_
- Who saw fewer birds: Jim or Paul? 9. \_\_\_\_\_
- Did Linda see more or less than a dozen birds? 10. \_\_\_\_\_
- Tell how you would show 4 birds on the pictograph?  
11. \_\_\_\_\_
- What is the total number of birds seen by the 4 people? 12. \_\_\_\_\_

# ANSWER KEY

## Birdwatching Pictograph

Pat, Jim, Linda, and Paul went on a bird watching walk.  
The pictograph below shows how many birds each person saw.

Birdwatching Trip

Name	Number of Birds Seen
Pat	
Jim	
Linda	
Paul	

# Preview

Please log in to download  
the printable version of this worksheet.

- 1.
- 2.
- 3.
- 4.
- 5.
- 6.
- 7.
- 8.
- 9.

10. Did Linda see more or less than a dozen birds? 10. less

11. Tell how you would show 4 birds on the pictograph?  
11. Two bird symbols represent 4 birds.

12. What is the total number of birds seen by the 4 people? 12. 46 birds