

1.

Fractions

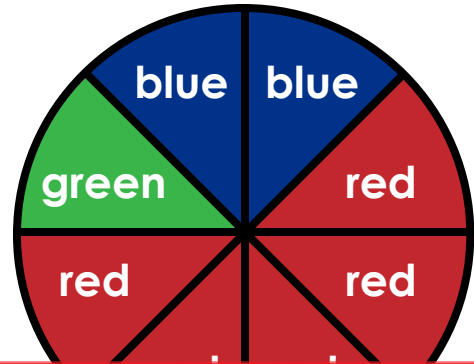
What fraction of the shape is shaded?



2.

Fractions

What fraction of the circle is red?




Preview

Please log in to download the printable version of this worksheet.

Salomé bought 10 red apples and 3 green apples.

What fraction of her apples are green?

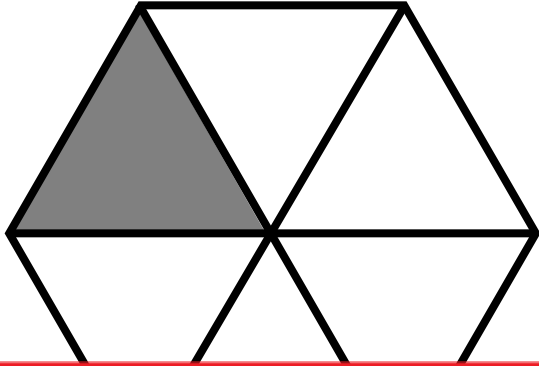
What fraction of the faces are smiling?



5.

Fractions

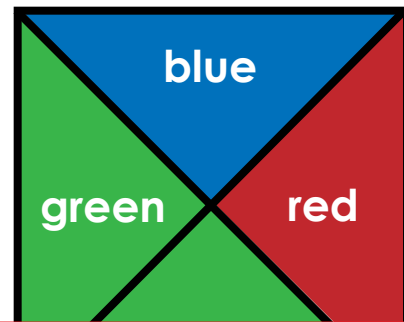
What fraction of the shape is shaded?



6.

Fractions

What fraction of the square is blue?




Preview

Please log in to download the printable version of this worksheet.

Liam has 7 orange golf balls and 3 white golf balls .

What fraction of his golf balls are orange?

What fraction of the squares are to the right of the line?



9.

Fractions

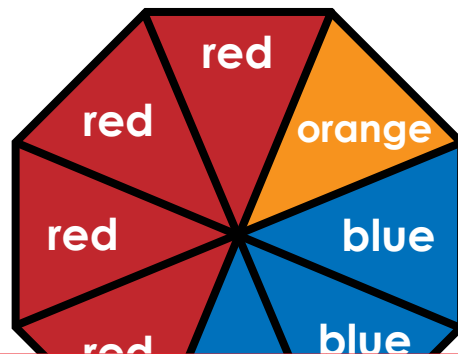
What fraction of the shape is shaded?



10.

Fractions

What fraction of the octagon is blue?



Preview

Please log in to download the printable version of this worksheet.

Jasmine has 3 crayons.
One is pink. One is blue.
One is brown.

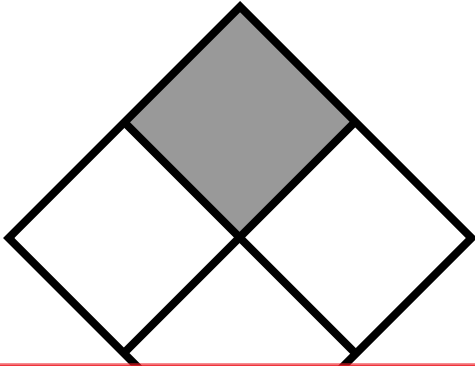
What fraction of her crayons are pink?

What fraction of the stars are black?



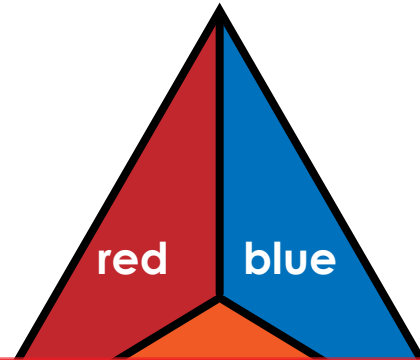
13. Fractions

What fraction of the shape is shaded?



14. Fractions

What fraction of the triangle is blue?




Preview

Please log in to download the printable version of this worksheet.

There are 10 boys and 7 girls in Mrs. Smith's class.

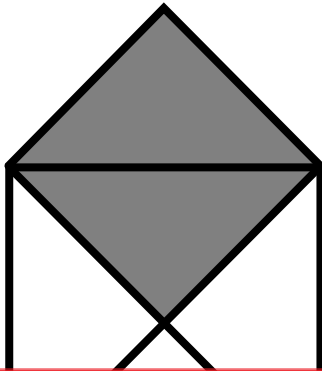
What fraction of her students are girls?

What fraction of the circles are inside the square?



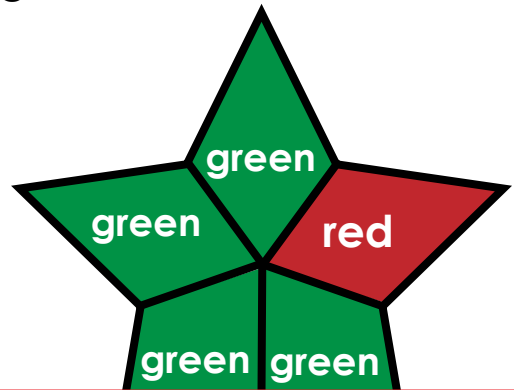
17. Fractions

What fraction of the shape is shaded?



18. Fractions

What fraction of the star is green?




Preview

Please log in to download
the printable version of this worksheet.

There are 5 birds in a tree. 3 are bluebirds. 2 are robins.


What fraction of the birds are bluebirds?

What fraction of the flowers are in a vase?



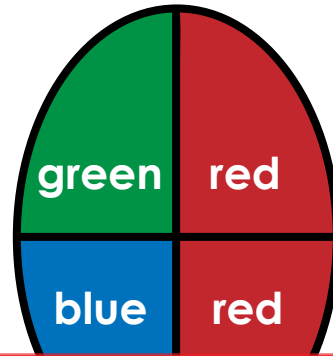
21. Fractions

What fraction of the shape is shaded?



22. Fractions

What fraction of the oval is red?




Preview

Please log in to download the printable version of this worksheet.

**Rosie is at the beach.
She has 4 sand pails.
One pail has sand in it.
The rest do not.**

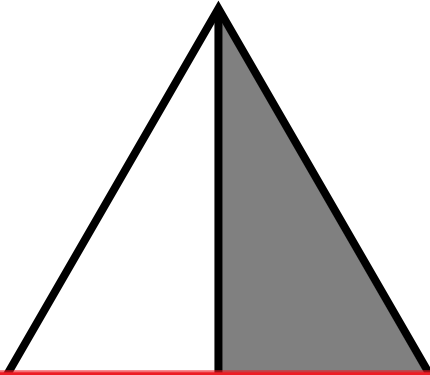
What fraction of her pails have sand?

What fraction of the boats are sailboats?



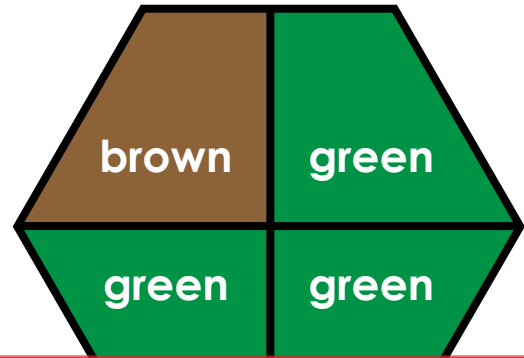
25. Fractions

What fraction of the shape is shaded?



26. Fractions

What fraction of the hexagon is green?




Preview

Please log in to download
the printable version of this worksheet.

**Dad baked 11 cookies.
He ate 6 of them.**

**What fraction of the
cookies did he eat?**

What fraction of the faces
have hair?



29. Fractions

What fraction of the shape is shaded?

30. Fractions

What fraction of the trapezoid is orange?



Preview

Please log in to download the printable version of this worksheet.

Name: _____

Task Cards: Fractions

1.

2.

3.

4.

5.

Preview

Please log in to download
the printable version of this worksheet.



26.

27.

28.

29.

30.

ANSWER KEY

Task Cards: Fractions

1.

$$\frac{3}{4}$$

2.

$$\frac{5}{8}$$

3.

$$\frac{3}{13}$$

4.

$$\frac{7}{12}$$

5.

$$\frac{1}{6}$$

Preview

Please log in to download
the printable version of this worksheet.



26.

$$\frac{3}{4}$$

27.

$$\frac{6}{11}$$

28.

$$\frac{3}{6} = \frac{1}{2}$$

29.

$$\frac{3}{10}$$

30.

$$\frac{1}{3}$$

Task Cards: Fractions

This file contains 30 task cards.

There are countless ways to use task cards in your classroom.
Here are a few ideas:

Preview

Please log in to download
the printable version of this worksheet.



Have a parent, friend, or volunteer sit with individual students who need extra help. They can practice by solving the problems on the task cards together.