


Name: _____


Odd or Even?

Count the items in each group. Tell whether there is an odd number or even number of each object.



How many? _____

Odd or even? _____



How many? _____

Odd or even? _____




Preview

Please log in to download
the printable version of this worksheet.




Odd or even? _____




How many? _____

Odd or even? _____



How many? _____

Odd or even? _____



How many? _____

Odd or even? _____

ANSWER KEY

Odd or Even?


Count the items in each group. Tell whether there is an odd number or even number of each object.



How many? 11

Preview

Please log in to download the printable version of this worksheet.



How many? 11

Odd or even? odd