


Name: _____

Using Arrays to Divide



How many rows are in the array? _____

How many columns are in the array? _____

How many dots are in the array? _____


Write a division fact that is shown by the array.

$$\underline{\quad} \div \underline{\quad} = \underline{\quad}$$




Preview

Please log in to download
the printable version of this worksheet.



Write a division fact that is shown by the array.

$$\underline{\quad} \div \underline{\quad} = \underline{\quad}$$



How many rows are in the array? _____


How many columns are in the array? _____

How many dots are in the array? _____

Write a division fact that is shown by the array.

$$\underline{\quad} \div \underline{\quad} = \underline{\quad}$$

Using Arrays to Divide



How many rows are in the array? _____

How many columns are in the array? _____

How many dots are in the array? _____


Write a division fact that is shown by the array.

$$\underline{\quad} \div \underline{\quad} = \underline{\quad}$$




Preview

Please log in to download
the printable version of this worksheet.



Write a division fact that is shown by the array.

$$\underline{\quad} \div \underline{\quad} = \underline{\quad}$$



How many rows are in the array? _____

How many columns are in the array? _____


How many dots are in the array? _____

Write a division fact that is shown by the array.

$$\underline{\quad} \div \underline{\quad} = \underline{\quad}$$

ANSWER KEY

Using Arrays to Divide



How many rows are in the array? 4

How many columns are in the array? 7

How many dots are in the array? 28


Write a division fact that is shown by the array.

$28 \div 4 = 7$ or $28 \div 7 = 4$




Preview

Please log in to download
the printable version of this worksheet.



Write a division fact that is shown by the array.

$18 \div 2 = 9$ or $18 \div 9 = 2$



How many rows are in the array? 4

How many columns are in the array? 4


How many dots are in the array? 16

Write a division fact that is shown by the array.

$16 \div 4 = 4$

ANSWER KEY

Using Arrays to Divide



How many rows are in the array? 5

How many columns are in the array? 6

How many dots are in the array? 30


Write a division fact that is shown by the array.

$30 \div 6 = 5$ or $30 \div 5 = 6$



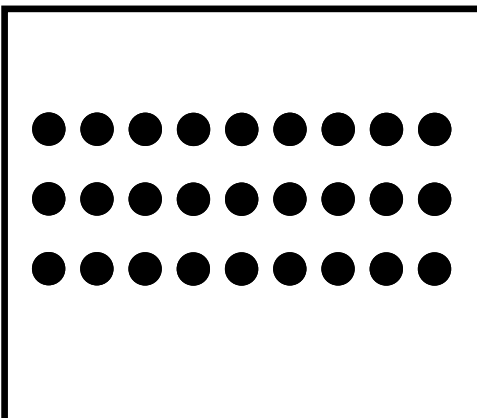
Preview

Please log in to download
the printable version of this worksheet.



Write a division fact that is shown by the array.

$20 \div 5 = 4$ or $20 \div 4 = 5$



How many rows are in the array? 3

How many columns are in the array? 9

How many dots are in the array? 27

Write a division fact that is shown by the array.

$27 \div 3 = 9$ or $27 \div 9 = 3$