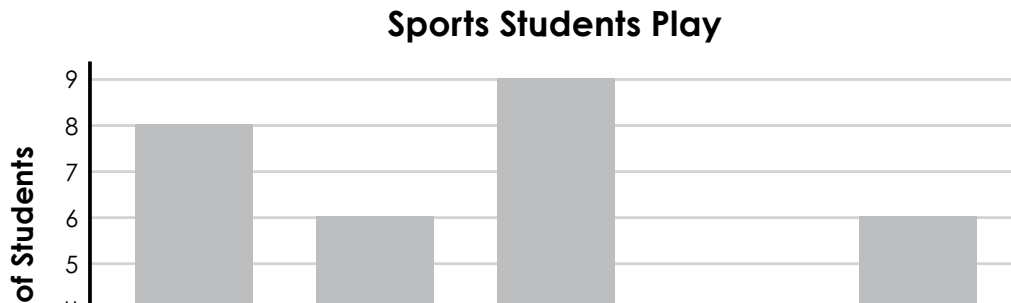


Name: _____

Daily Word Problem

The following bar graph shows the information a third-grade class collected about the types of sports students play.



Preview

Please log in to download
the printable version of this worksheet.

baseball combined?

Show your work.

answer: _____



Name: _____

Daily Word Problem

Amara rode her bike to meet her friends at the park at 4:30 p.m. It took her 13 minutes to ride her bike there. What time did Amara leave her house?

Show your work.



answer: _____



Name: _____

C-113

Area;
Operations

**Multi-
Step**

Daily Word Problem

Carter's Construction Company is building two different bathrooms. Find the areas of both bathroom floors.

Bathroom 1



Bathroom 2



Preview

Please log in to download
the printable version of this worksheet.

Show your work.

answer: _____



Name: _____

C-114

Operations

Single-
Step

Daily Word Problem

Anima's collection of 180 books fits on her large bookcase.
The bookcase fits 30 books on each shelf.

The bookcase is full.


How many total shelves are there on the bookcase?

Show your work.



Preview

Please log in to download
the printable version of this worksheet.



answer: _____

Name: _____

Daily Word Problem

A bulletin board has an area of 24 square feet.


If we know that the longer side of the bulletin board is 8 feet, what is the length of the shorter side?

?



Preview

Please log in to download
the printable version of this worksheet.



answer: _____

Daily Word Problem

Preview

Please log in to download
the printable version of this worksheet.

