

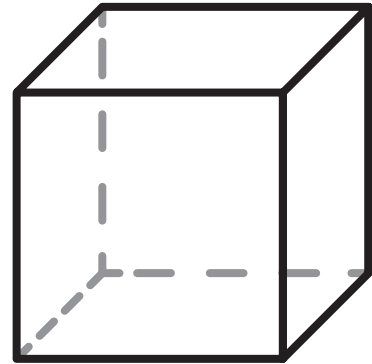



Name: \_\_\_\_\_

# Math Buzz

Add.

$$\begin{array}{r} 2 \\ + 4 \\ \hline \end{array}$$

Color the **cube**.

8



## Preview

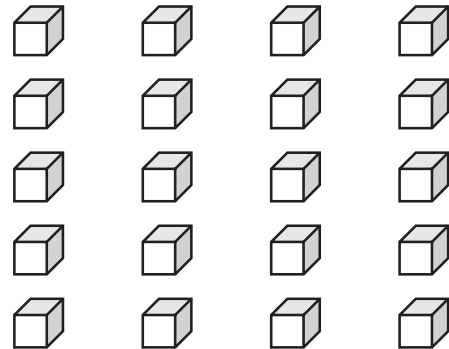
Please log in to download the printable version of this worksheet.

Dion's book has 10 pages. He read 7. How many pages does Dion have left?


<b>10</b>	
<b>7</b>	<b>?</b>

answer: \_\_\_\_\_ **pages**

Circle groups of ten.  
Write how many tens and ones.

20 ones = \_\_\_\_\_ **tens** \_\_\_\_\_ **ones**

Name: \_\_\_\_\_

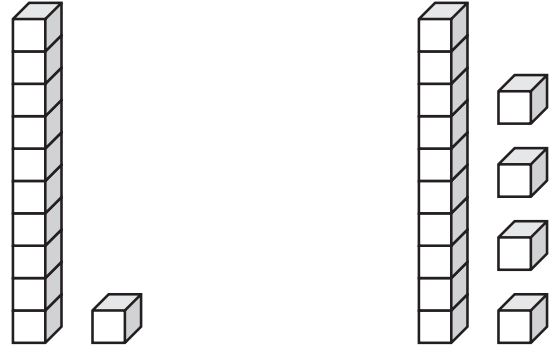


# Math Buzz

Fill in the missing numbers.

1 more	
50	
82	
104	
38	

Compare.




\_\_\_\_\_ is less than \_\_\_\_\_



# Preview

Please log in to download  
the printable version of this worksheet.



The lizard is \_\_\_\_\_ squares long.

there in all?

?	
10	8

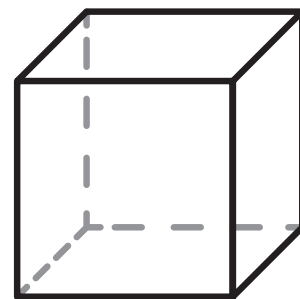



answer: \_\_\_\_\_ kids

Name: \_\_\_\_\_



# Math Buzz

Color the **sphere**.



Subtract.

Circle groups of ten.

Write how many tens and ones



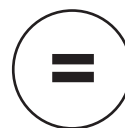
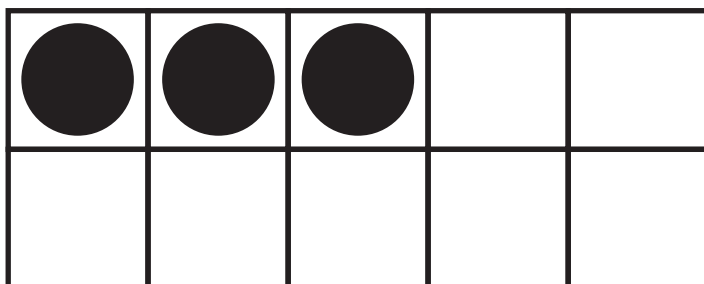
# Preview

Please log in to download the printable version of this worksheet.




30 ones = \_\_\_\_\_ tens \_\_\_\_\_ ones

Color the circle to show whether the two sides are equal or not equal.





3

Name: \_\_\_\_\_



# Math Buzz

Color the circle to show whether the two sides are equal or not equal.



five

Compare.

Write the number of corners.




# Preview

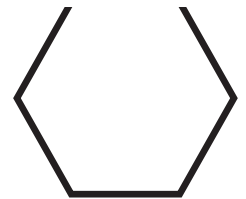
Please log in to download the printable version of this worksheet.

\_\_\_\_\_ is greater than \_\_\_\_\_

\_\_\_\_\_ > \_\_\_\_\_




\_\_\_\_\_ corners



\_\_\_\_\_ corners

Continue the pattern.



Name: \_\_\_\_\_



# Math Buzz

Start at 4. Count by tens.

4, 14, 24, 34, \_\_\_\_\_, \_\_\_\_\_, \_\_\_\_\_,

\_\_\_\_\_ , \_\_\_\_\_ , \_\_\_\_\_ , \_\_\_\_\_ , \_\_\_\_\_

Use the number bond to complete the number sentences.

Write the total laps ran for each student.



## Preview

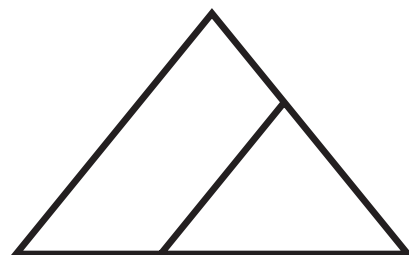
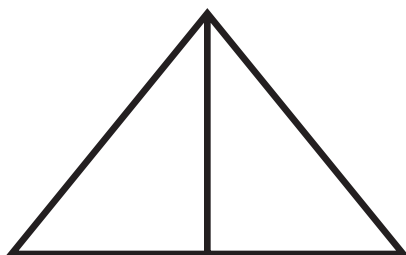
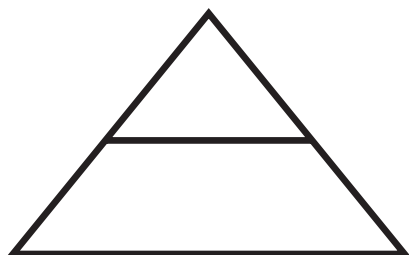
Please log in to download the printable version of this worksheet.

	+		=	
--	---	--	---	--

	+		=	
--	---	--	---	--

How many laps did Lily and Ivan run total?

Circle the shape that has equal parts.





Add.

$$\begin{array}{r} 2 \\ + 4 \\ \hline 6 \end{array}$$

$$\begin{array}{r} 8 \\ + 1 \\ \hline 9 \end{array}$$

Color the **cube**.

Dion's book has 10 pages. He read 7. How many pages does Dion have left?

10	
7	?

**10 - 7 = 3**

answer: **3** pages

Circle groups of ten. Write how many tens and ones.

20 ones = **2** tens **0** ones

Fill in the missing numbers.

1 more	
50	<b>51</b>
82	<b>83</b>
104	<b>105</b>
38	<b>39</b>

Compare.

**11** is less than **14**

How many squares long is the lizard?

There are 10 girls and 8 boys in Miss Hall's class. How many kids are there in all?

?	
10	8

**10 + 8 = 18**



# Preview

Please log in to download the printable version of this worksheet.

Color the circle to show whether the two sides are equal or not equal.

**=** five  
**≠**

Compare.

**17** is greater than **12**

**17 > 12**

Write the number of corners.

**3** corners      **4** corners  
**0** corners      **6** corners

Continue the pattern.

Start at 4. Count by tens.

4, 14, 24, 34, **44**, **54**, **64**,  
**74**, **84**, **94**, **104**, **114**

Use the number bond to complete the number sentences.

**8** + **2** = **10**

**2** + **8** = **10**

Write the total laps ran for each student.

Laps Ran	Total
Lily	<b>7</b>
Ivan	<b>5</b>

Who ran more laps?  
**Lily**

How many laps did Lily and Ivan run total?  
**12**

Circle the shape that has equal parts.