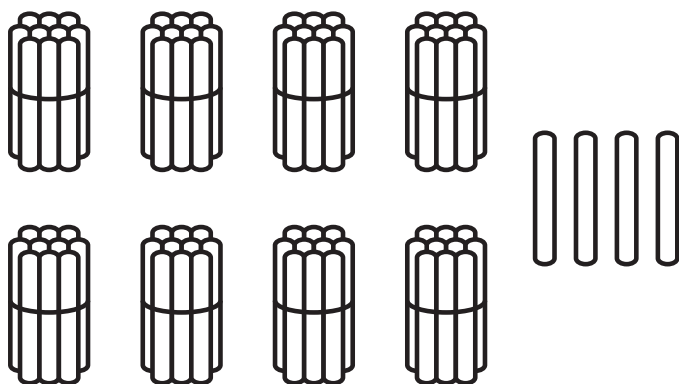




Name: _____

Math Buzz

Each bundle has 10 sticks. Count the sticks and write how many tens and ones.



Tens	Ones

How many sticks total? _____

Fill in the missing numbers.

	10 less	
1 less	79	1 more
	10 more	

What is the value of the coin shown.



dime

1¢


10¢

5¢

25¢

Zac won 68 tickets at the arcade. Tayshia won 82 tickets. Who won fewer tickets?

answer: _____



Name: _____



Math Buzz

Draw lines to complete the problem.

The pink line is longer than the yellow line.

The yellow line is longer than the purple line.

pink

yellow



Preview

Please log in to download
the printable version of this worksheet.

Which is **not true**?

$$11 - 5 = 5$$

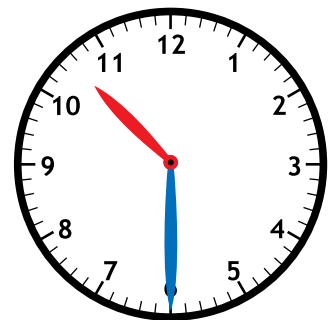
$$10 - 5 = 5$$

$$15 - 10 = 5$$

Add.

$$\begin{array}{r} 86 \\ + 2 \\ \hline \end{array}$$

Fill in the time shown
on the clock.





Name: _____

Math Buzz

Subtract.

$$\begin{array}{r} 74 \\ - 2 \\ \hline \end{array}$$

Circle each number sentence that equals 15.

$10 + 5$

$8 + 7$

$9 + 5$

$5 + 5 + 5$

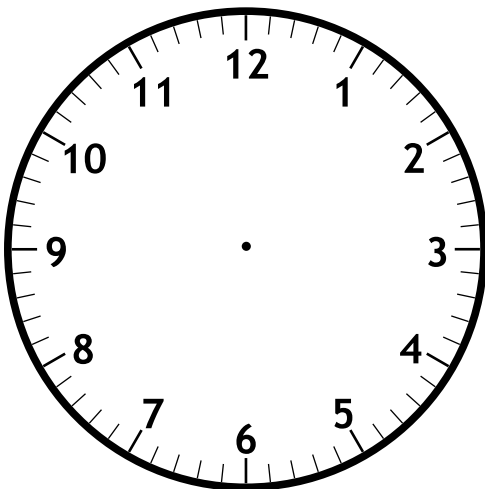
Color one fourth of each shape.



Preview

Please log in to download
the printable version of this worksheet.

Melissa has a flute lesson at 4:30.
Draw hands on the clock to show 4:30.


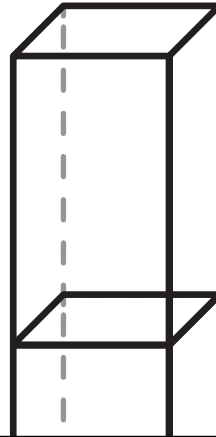
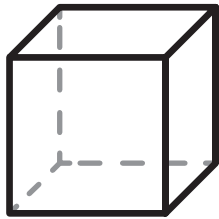
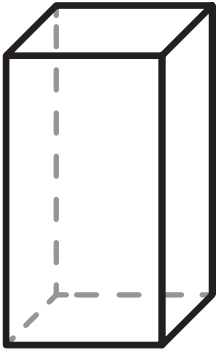


Name: _____



Math Buzz

Combine the shapes on the left. Circle the new shape you can make.



Preview

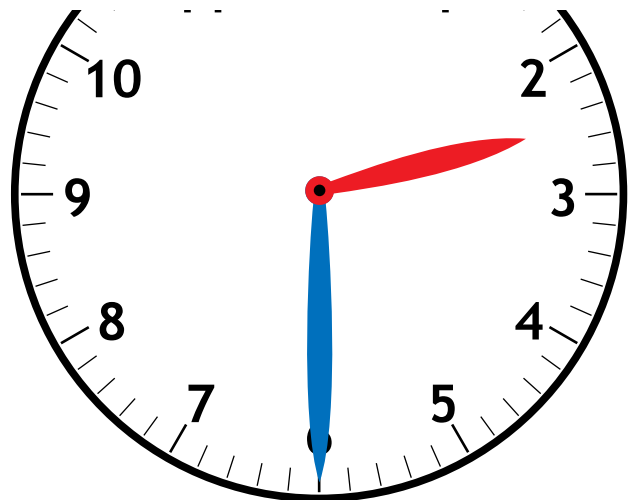
Please log in to download the printable version of this worksheet.

Which is **true**?

$$11 + 3 = 13$$

$$9 + 4 = 13$$

$$13 + 3 = 13$$



Name: _____



Math Buzz

What is the value of the coin shown.



quarter

1¢

10¢

5¢

25¢

Add.

$$\underline{\hspace{2cm}} = 6 + 7 + 6$$

Subtract.

$$93 - 3 = \underline{\hspace{2cm}}$$



Preview

Please log in to download the printable version of this worksheet.

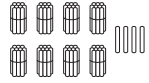


Gage	
Max	

		Hours Spent Reading										
Students	Fatima											
	Gage											
	Max											
		0	1	2	3	4	5	6	7	8	9	10
		Hours										



Each bundle has 10 sticks. Count the sticks and write how many tens and ones.



Tens	Ones
8	4

How many sticks total? **84**

What is the value of the coin shown.



dime

1¢ **10¢**
5¢ 25¢

Fill in the missing numbers.

	10 less 69	
1 less 78	79	1 more 80
	10 more 89	

Zac won 68 tickets at the arcade. Tayshia won 82 tickets. Who won fewer tickets?

68 < 82

answer: **Zac**

Draw lines to complete the problem.

pink _____

yellow _____

purple _____

Write **shorter** or **longer** to complete the sentence.

Which is **not true**?

11 - 5 = 5

10 - 5 = 5

15 - 10 = 5

Add.

$$\begin{array}{r} 86 \\ + 2 \\ \hline 88 \end{array}$$

Fill in the time shown on the clock.



10:30

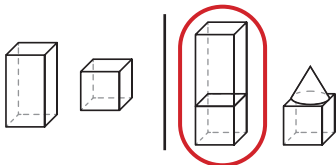


Preview

Please log in to download the printable version of this worksheet.

Answers may vary.

Combine the shapes on the left. Circle the new shape you can make.



Add.

90 + 9 = **99**

Which is **true**?

11 + 3 = 13

9 + 4 = 13

13 + 3 = 13

Fill in the time shown on the clock.



2:30

What is the value of the coin shown.



quarter

1¢ 10¢
5¢ **25¢**

Add.

19 = 6 + 7 + 6

Subtract.

93 - 3 = **90**

The tally chart shows how many hours Fatima, Gage, and Max spent reading.

Hours Spent Reading
Fatima:
Gage:
Max:

