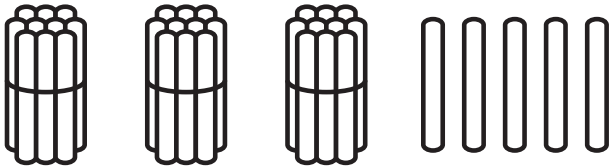




Name: _____

Math Buzz

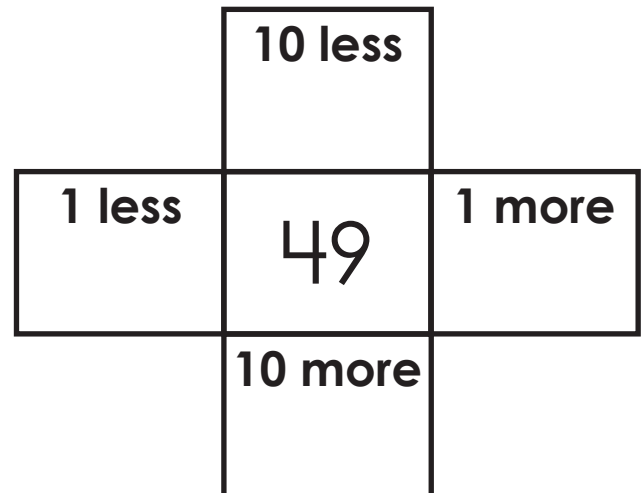
Each bundle has 10 sticks.
Count the sticks and write
how many tens and ones.



Tens	Ones

How many sticks total? _____

Fill in the missing numbers.



What is the value
of the coin shown.



penny

1¢

5¢


10¢

25¢

Room 1A has 25 students.
Room 1B has 22 students.
Which room has more students?

answer: _____

Name: _____



Math Buzz

Draw lines to complete the problem.

The blue line is shorter than the orange line.

The orange line is shorter than the green line.

blue

orange



Preview

Please log in to download the printable version of this worksheet.

Which is **true**?

$$10 - 5 = 4$$

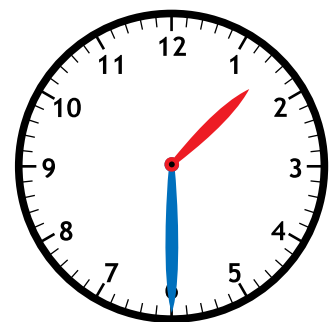
$$14 - 9 = 4$$

$$11 - 7 = 4$$

Add.

$$\begin{array}{r} 57 \\ + 2 \\ \hline \end{array}$$

Fill in the time shown on the clock.



Name: _____



Math Buzz

Subtract.

$$\begin{array}{r} 46 \\ - 5 \\ \hline \end{array}$$

Circle each number sentence that equals 18.

$8 + 10$

$9 + 6$

$9 + 9$

$6 + 4 + 8$

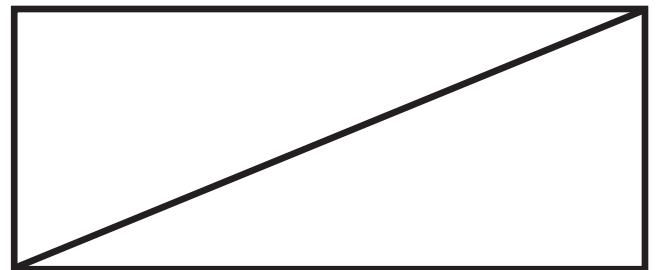
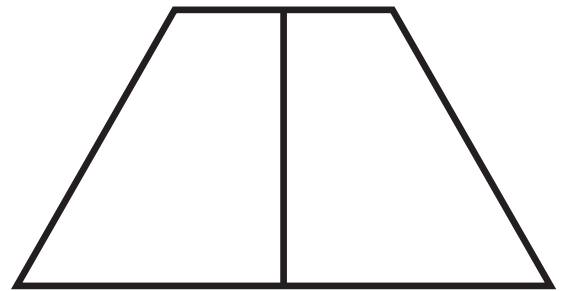
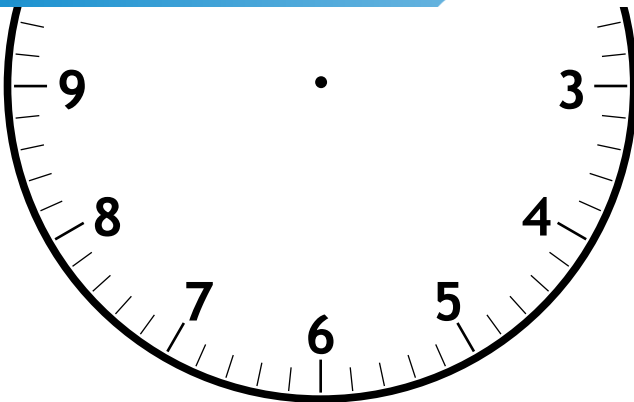
School starts at 8:30.
Draw the hands on the

Color one half of each shape.




Preview

Please log in to download
the printable version of this worksheet.







Name: _____



Math Buzz

Combine the shapes on the left. Circle the new shape you can make.



Preview

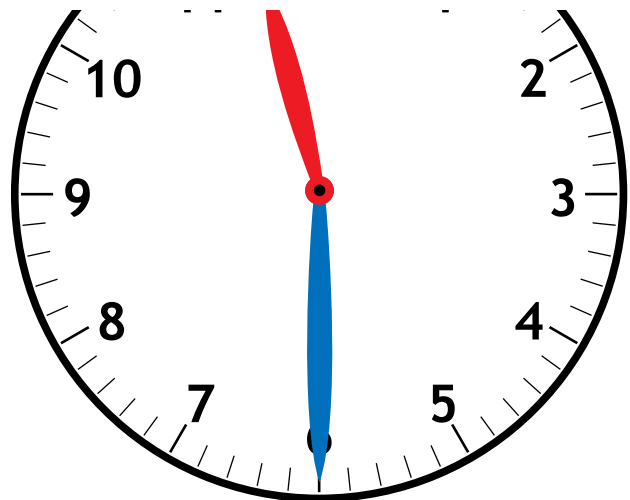
Please log in to download the printable version of this worksheet.

Which is **not true**?

$$7 + 7 = 14$$

$$5 + 8 = 14$$

$$10 + 4 = 14$$





Name: _____

Math Buzz

What is the value of the coin shown.



nickel

1¢ 5¢ 10¢ 25¢

Add.

_____ = 8 + 3 + 8


Subtract.

89 - 9 = _____



Preview

Please log in to download the printable version of this worksheet.



July	
August	

Summer Birthdays

Month	0	1	2	3	4	5	6	7	8	9	10
June											
July											
August											



Each bundle has 10 sticks. Count the sticks and write how many tens and ones.

Tens	Ones
3	5

How many sticks total? **35**

Fill in the missing numbers.

	10 less	
	39	
1 less	49	1 more
48		50
	10 more	
	59	

What is the value of the coin shown.

penny

1¢

5¢
10¢
25¢

Room 1A has 25 students. Room 1B has 22 students. Which room has more students?

25 > 22

answer: **Room 1A**

Draw lines to complete the problem.

blue _____

orange _____

green _____

Write **shorter** or **longer** to complete the sentence.

Which is **true**?

$10 - 5 = 4$

$14 - 9 = 4$

$11 - 7 = 4$

Add.

$$\begin{array}{r} 57 \\ + 2 \\ \hline 59 \end{array}$$

Fill in the time shown on the clock.

1:30



Preview

Please log in to download the printable version of this worksheet.

Answers may vary.

Combine the shapes on the left. Circle the new shape you can make.

Add.

$76 + 1 = \underline{77}$

Which is **not true**?

$7 + 7 = 14$

$5 + 8 = 14$

$10 + 4 = 14$

Fill in the time shown on the clock.

11:30

What is the value of the coin shown.

nickel

1¢ **5¢** 10¢ 25¢

Add.

$\underline{19} = 8 + 3 + 8$

Subtract.

$89 - 9 = \underline{80}$

The tally chart shows how many kids in Mrs. Goga's class have summer birthdays.

Month	Number of Kids
June	3
July	4
August	2