

2-Digit Addition (Without Regrouping)

Add

$$\begin{array}{r} 27 \\ + 2 \\ \hline \end{array}$$

Add

Nolan picks 12 apples.
His dad picks 5 apples.
How many apples did they pick in all?
(show your work.)

Answer: _____

Add

$$\begin{array}{r} 32 \\ + 15 \\ \hline \end{array}$$



Preview

Please log in to download
the printable version of this worksheet.

Add

$$\begin{array}{r} 27 \\ + 2 \\ \hline \end{array}$$

Add

$$\begin{array}{r} 27 \\ + 2 \\ \hline \end{array}$$

Add


$$\begin{array}{r} 27 \\ + 2 \\ \hline \end{array}$$

glue



Fold along this line.

Add



Preview

Please log in to download
the printable version of this worksheet.



Fold along this line.

Add

Nolan picks 12 apples.
His dad picks 5 apples.



Preview


Please log in to download
the printable version of this worksheet.

Answer: _____



Fold along this line.

Add



Preview

Please log in to download
the printable version of this worksheet.



Fold along this line.

Add

Lei has 15 toy bears.

Her sister gives her 3 more.



Preview


Please log in to download
the printable version of this worksheet.

Answer: _____



Fold along this line.

Add



Preview

Please log in to download
the printable version of this worksheet.



Fold along this line.

Add

Cole has 29 toy cars.
His friend gives him 10 more.



Preview

Please log in to download
the printable version of this worksheet.

Answer: _____



Fold along this line.

Add



Preview

Please log in to download
the printable version of this worksheet.



Fold along this line.

Add

Raven has 12 pink socks and 12 red socks.
How many socks does Raven have in all?



Preview


Please log in to download
the printable version of this worksheet.

Answer: _____



Fold along this line.

Add



Preview

Please log in to download
the printable version of this worksheet.



Fold along this line.

Add

Zakira has 11 stickers.

Lasaundra gave her 15 more.



Preview


Please log in to download
the printable version of this worksheet.

Answer: _____



Fold along this line.

Add



Preview

Please log in to download
the printable version of this worksheet.



Fold along this line.

Add

James has 32 pencils.
His teacher gave him 8 more.



Preview


Please log in to download
the printable version of this worksheet.

Answer: _____



Fold along this line.

Add



Preview

Please log in to download
the printable version of this worksheet.



Fold along this line.

Add

Emmanuel drew 17 circles.

Kevonna drew 13 more.



Preview


Please log in to download
the printable version of this worksheet.

Answer: _____



Fold along this line.

Add



Preview

Please log in to download
the printable version of this worksheet.



Fold along this line.

Add

Rajesh walked 45 steps and ran 24 more.
How many steps did he take in all?



Preview


Please log in to download
the printable version of this worksheet.

Answer: _____



Fold along this line.

Add



Preview

Please log in to download
the printable version of this worksheet.



Fold along this line.

Add

Cherish has 28 red candies and 11 blue.
How many candies does she had in all?



Preview


Please log in to download
the printable version of this worksheet.

Answer: _____



Fold along this line.

Add



Preview

Please log in to download
the printable version of this worksheet.



Fold along this line.

Add

Roland picked 56 blueberries.
His sister picked 43.



Preview


Please log in to download
the printable version of this worksheet.

Answer: _____



Fold along this line.

Add



Preview

Please log in to download
the printable version of this worksheet.



Fold along this line.

Add

Mia has 24 purple hair clips and 15 yellow.
How many hair clips does Mia have in all?



Preview


Please log in to download
the printable version of this worksheet.

Answer: _____



Fold along this line.

Add



Preview

Please log in to download
the printable version of this worksheet.



Fold along this line.

Add

Ava ran 13 laps.

Brooke ran 12.



Preview


Please log in to download
the printable version of this worksheet.

Answer: _____



Fold along this line.

Add



Preview

Please log in to download
the printable version of this worksheet.



Fold along this line.

Add

Sayed has 72 coins.

His dad gave him 27 more.



Preview


Please log in to download
the printable version of this worksheet.

Answer: _____



Fold along this line.

Add



Preview

Please log in to download
the printable version of this worksheet.



Fold along this line.

Add

Lin skipped 14 rocks.
Her brother skipped 13 more.



Preview

Please log in to download
the printable version of this worksheet.

Answer: _____




Fold along this line.

Add



Preview

Please log in to download
the printable version of this worksheet.





Fold along this line.

Add

Javi has 39 toy trains.
Isabel has 21.



Preview

Please log in to download
the printable version of this worksheet.

Answer: _____