


Name: _____


Addition

a.




$$\underline{4} + \underline{3} = \underline{\quad}$$

b.




$$\underline{\quad} + \underline{\quad} = \underline{\quad}$$

c.



$$\underline{\quad} + \underline{\quad} = \underline{\quad}$$

d.




$$\underline{\quad} + \underline{\quad} = \underline{\quad}$$

e.



$$\underline{\quad} + \underline{\quad} = \underline{\quad}$$

f.



$$\underline{\quad} + \underline{\quad} = \underline{\quad}$$