


Name: _____


Find the total cost of the items shown.
Show your work.




Total cost: _____



Total cost: _____



Total cost: _____



Total cost: _____

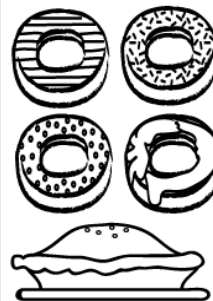
Village Bakery

Prices

Chocolate Chip Cookies.....	3 for 99¢
Donuts.....	2 for 78¢
Pretzels.....	97¢ ea.
Cupcakes.....	\$1.06 ea.
Pies.....	\$7.25 ea.
Cakes.....	\$8.98 ea.



Total cost: _____




Total cost: _____

ANSWER KEY


Find the total cost of the items shown.
Show your work.




Total cost: \$2.03



Total cost: \$8.24



Total cost: \$3.02



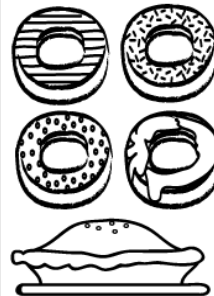
Total cost: \$17.01

Village Bakery Prices

Chocolate Chip Cookies.....	3 for 99¢
Donuts.....	2 for 78¢
Pretzels.....	97¢ ea.
Cupcakes.....	\$1.06 ea.
Pies.....	\$7.25 ea.
Cakes.....	\$8.98 ea.



Total cost: \$9.76



Total cost: \$8.81