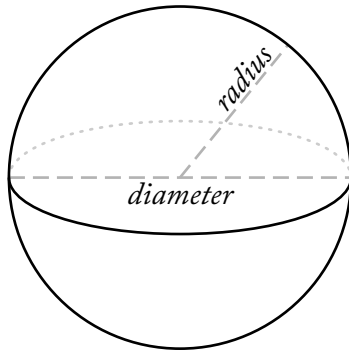


Name: \_\_\_\_\_

## Surface Area of a Sphere



$$\pi = 3.14$$

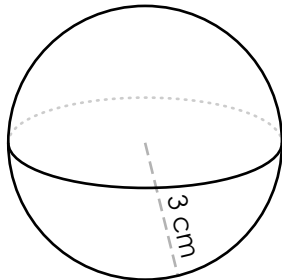
$$\text{Surface Area} = 4\pi r^2$$



# ~ PREVIEW ~

Please log in or register to download the printable version of this worksheet.

b.



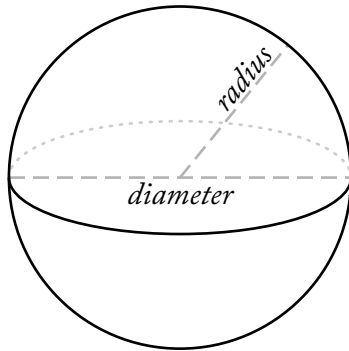
b. \_\_\_\_\_

c.  $radius = 5 \text{ mm}$

c. \_\_\_\_\_

# ANSWER KEY

## Surface Area of a Sphere



$$\pi = 3.14$$

$$\text{Surface Area} = 4\pi r^2$$



~ **PREVIEW** ~

Please log in or register to download  
the printable version of this worksheet.