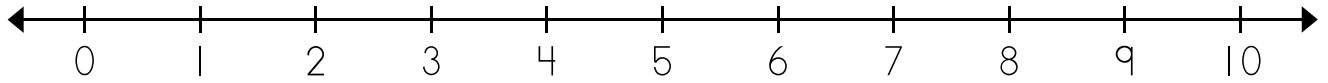


Name: _____

Number Line Subtraction

a.



$$8 - \underline{\quad} = \underline{\quad}$$

I started at _____.

I counted back _____ spaces.

I stopped on _____.

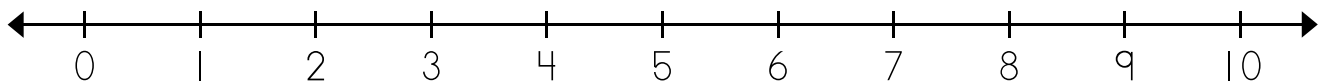


Preview

Please log in to download
the printable version of this worksheet.

I stopped on _____.

c.



$$10 - \underline{\quad} = 6$$

I started at _____.

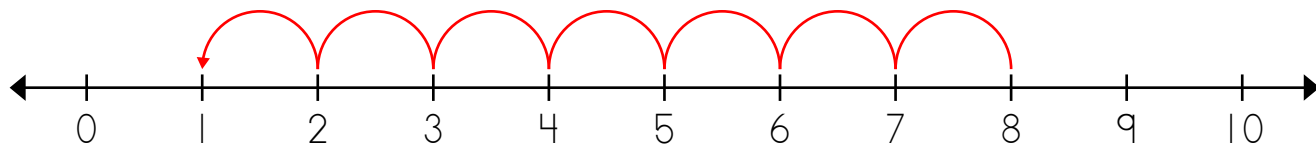
I counted back _____ spaces.

I stopped on _____.

ANSWER KEY

Number Line Subtraction

a.



$$8 - \underline{7} = \underline{1}$$

I started at 8.

I counted back 7 spaces.

b.

Preview

Please log in to download
the printable version of this worksheet.

c.



$$10 - \underline{4} = \underline{6}$$

I counted back 4 spaces.

I stopped on 6.