

Name: _____

Rounding to the Nearest Thousand

Round each number to the nearest thousand.

2,643 - _____

9,099 - _____



5,276 - _____

7,500 - _____

861 - _____



4,467 - _____

Strawberry Numbers



Which two strawberry numbers round to 1,000?

_____ and _____



Which two strawberry numbers round to 2,000?

_____ and _____

7, _____

3, _____

Write 4 numbers that round to 8,000

6, _____

8, _____

Write **True** or **False** for each statement.

3,338 rounds to 3,000. _____

8,833 rounds to 8,000. _____

455 rounds to 1,000. _____

398 rounds to 0. _____

ANSWER KEY

Rounding to the Nearest Thousand

Round each number to the nearest thousand.

$$2,643 - \underline{3,000}$$

$$9,099 - \underline{9,000}$$



$$5,276 - \underline{5,000}$$

$$7,500 - \underline{8,000}$$

$$861 - \underline{1,000}$$



$$4,467 - \underline{4,000}$$

Strawberry Numbers



Which two strawberry numbers round to 1,000?

536 and 1,389



Which two strawberry numbers round to 2,000?

1,612 and 2,266

Answers may vary

Write 4 numbers that round to 8,000

7, _____

3, _____

6, _____

8, _____

Write **True** or **False** for each statement.

3,338 rounds to 3,000. True

8,833 rounds to 8,000. False

455 rounds to 1,000. False

398 rounds to 0. True