






Name: _____

Shape Multiplication



Find the product of the numbers in the circles.

Find the product of the numbers in the trapezoids.

Find the product of the numbers in the octagons.



Preview




Please log in to download
the printable version of this worksheet.

Find the product of the numbers in the squares.

Find the product of the numbers in the triangles.

Find the product of the numbers in the hexagons.

Shape Multiplication



Find the product of the

Find the product of the

Find the product of the



Preview

Please log in to download
the printable version of this worksheet.

Find the product of the
numbers in the squares.

$$\begin{array}{r} \square \\ \times \square \\ \hline \end{array}$$

261
12
3,132

Find the product of the
numbers in the triangles.

$$\begin{array}{r} \triangle \\ \times \triangle \\ \hline \end{array}$$

505
44
22,220

Find the product of the
numbers in the hexagons.

$$\begin{array}{r} \hexagon \\ \times \hexagon \\ \hline \end{array}$$

198
17
3,366