


Name: _____

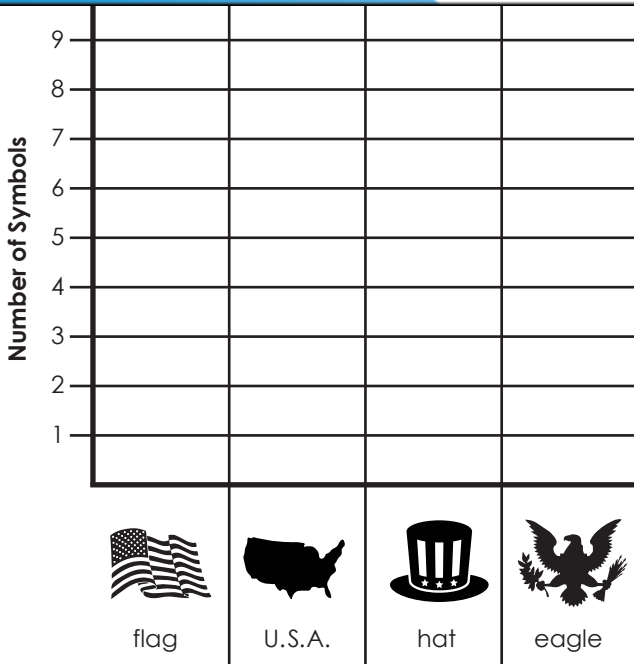
4th of July Bar Graph

Happy Independence Day. There are lots of symbols for our country. Count each of the symbols and use the information to complete the graph and answer the questions.



Preview

Please log in to download the printable version of this worksheet.



1. Which symbol appears the most?


2. Which symbol appears the least?

3. How many more flags are needed to have 10 flags? _____
4. How many more eagles are there than hats? _____
5. What is the total number of U.S.A. maps and flags? _____

ANSWER KEY

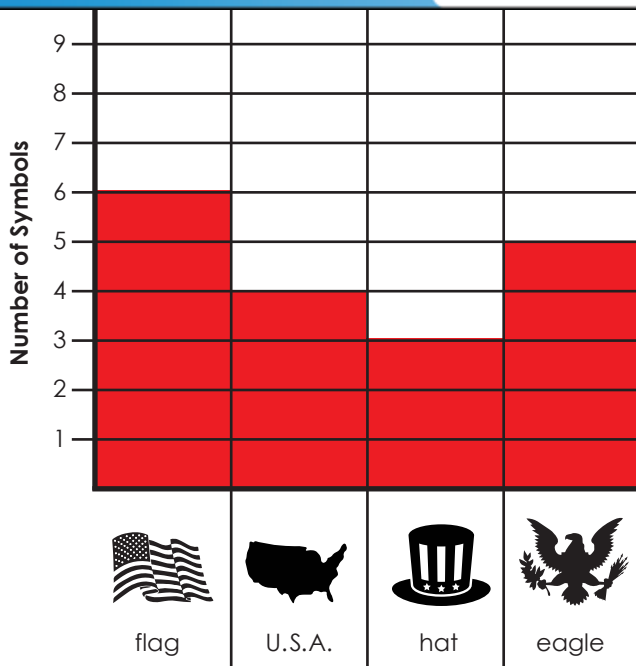
4th of July Bar Graph

Happy Independence Day. There are lots of symbols for our country. Count each of the symbols and use the information to complete the graph and answer the questions.



Preview

Please log in to download the printable version of this worksheet.



1. Which symbol appears the most?

flag

2. Which symbol appears the least?

hat

3. How many more flags are needed to have 10 flags?

4

4. How many more eagles are there than hats?

2

5. What is the total number of U.S.A. maps and flags?

10