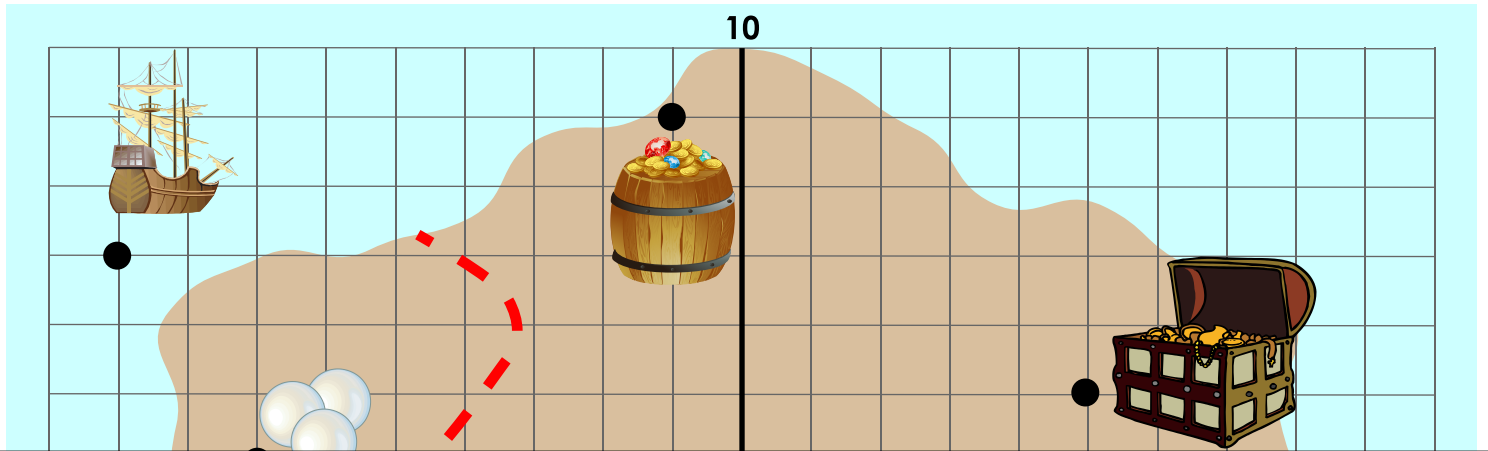


Name: \_\_\_\_\_

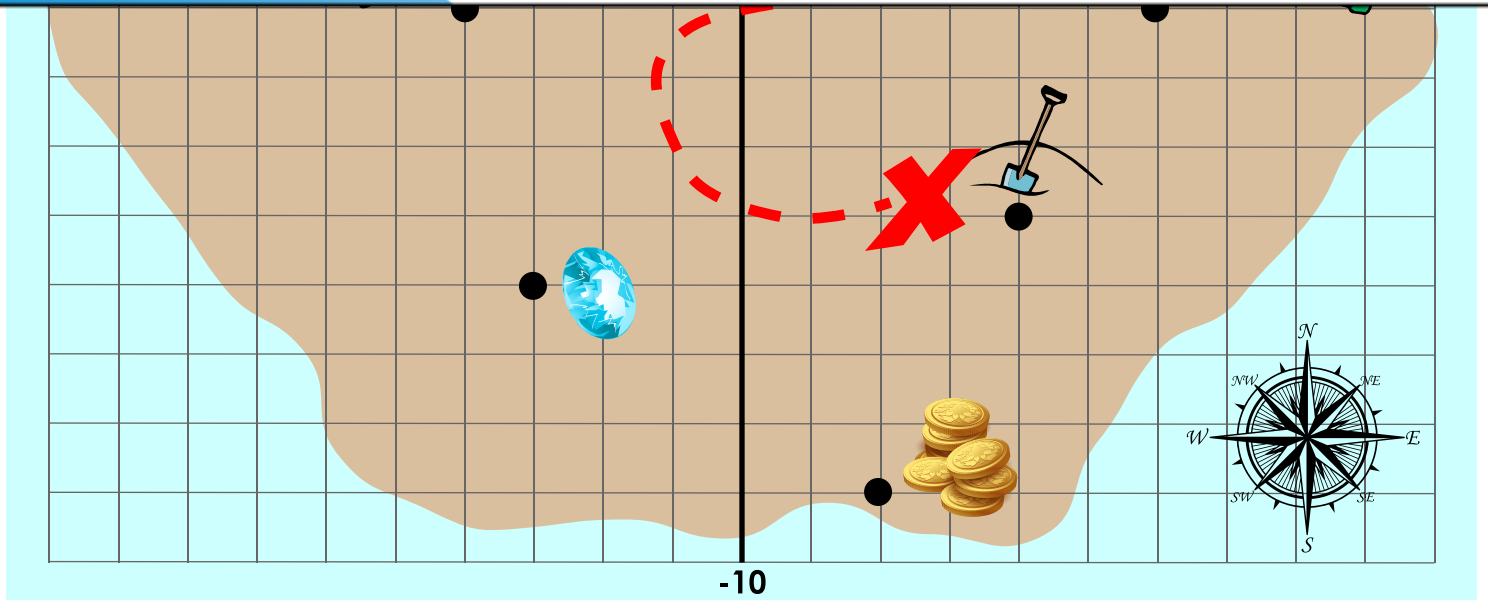
# Coordinate Grid Treasure Map

Below is a pirate map drawn as a coordinate grid.



# Preview

Please log in to download the printable version of this worksheet.



Name: \_\_\_\_\_

# Coordinate Grid Treasure Map

Write the coordinates for each object on the map. Write the coordinates as **(x, y)**.



telescope

\_\_\_\_\_




shovel

\_\_\_\_\_



# Preview

Please log in to download the printable version of this worksheet.



pearls

\_\_\_\_\_



palm trees

\_\_\_\_\_



compass

\_\_\_\_\_



barrel of treasure

\_\_\_\_\_

# ANSWER KEY

## Coordinate Grid Treasure Map

Write the coordinates for each object on the map. Write the coordinates as  $(x, y)$ .



telescope

$(6, -2)$



shovel

$(4, -5)$



# Preview

Please log in to download  
the printable version of this worksheet.

