


Name: \_\_\_\_\_

**K-141**

Comparing  
(Fewest/Most)

## Daily Word Problem

Zara has 17  stickers. Draw 17 circles below.




Who has the fewest s? \_\_\_\_\_

Name: \_\_\_\_\_

**K-142**

Subtraction  
within 20

## Daily Word Problem



# Preview

Please log in to download  
the printable version of this worksheet.

How many s  
are left?

\_\_\_\_\_

\_\_\_\_\_ - \_\_\_\_\_ = \_\_\_\_\_


Name: \_\_\_\_\_

**K-143**

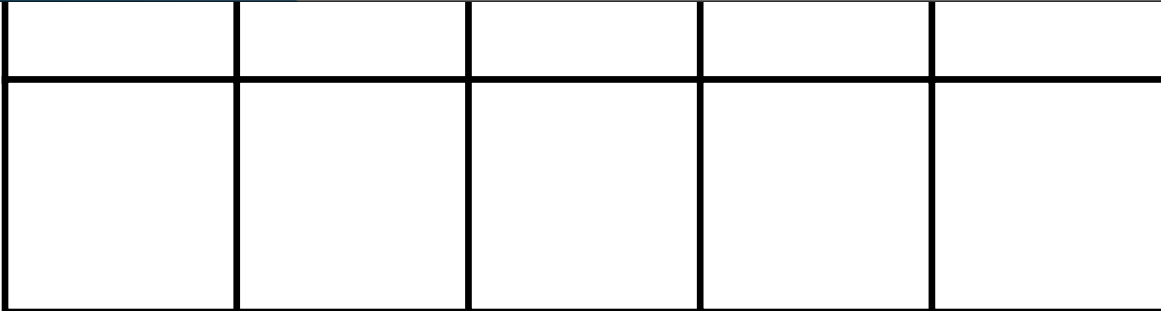
Counting to 20

## Daily Word Problem

Draw 10 more circles in the ten frame.



**Preview**  
Please log in to download  
the printable version of this worksheet.




$$10 + \underline{\hspace{2cm}} = \underline{\hspace{2cm}}$$


Name: \_\_\_\_\_

**K-144**


Subtraction  
within 20

## Daily Word Problem

How many s? \_\_\_\_\_



**Preview**  
Please log in to download  
the printable version of this worksheet.



Cross out 10 s. How many are left?

\_\_\_\_\_ - \_\_\_\_\_ = \_\_\_\_\_

Name: \_\_\_\_\_

**K-145**

Comparing  
(Longer/Shorter)

## Daily Word Problem



# Preview

Please log in to download  
the printable version of this worksheet.

How many   
long is the  ?

\_\_\_\_\_

How many   
long is the  ?

\_\_\_\_\_

Circle which is shorter.