


Name: \_\_\_\_\_

**K-136**

Subtraction  
within 20


## Daily Word Problem

There are



# Preview

Please log in to download  
the printable version of this worksheet.

How many  s  
are left?

\_\_\_\_\_

\_\_\_\_\_ - \_\_\_\_\_ = \_\_\_\_\_

Name: \_\_\_\_\_

**K-137**

Counting to 20

## Daily Word Problem

Draw 19 circles in the ten frames.





$$\underline{\quad\quad} + \underline{\quad\quad} = 19$$

Name: \_\_\_\_\_

**K-138**

Comparing  
(Fewest/Most)

## Daily Word Problem

Shen has 15 s. Draw 15 circles below.




Who has the most s? \_\_\_\_\_

Name: \_\_\_\_\_

K-139

Addition to 20

## Daily Word Problem



# Preview

Please log in to download  
the printable version of this worksheet.

How many **purple**  s? \_\_\_\_\_

How many total  s? \_\_\_\_\_


$$\underline{\hspace{2cm}} + \underline{\hspace{2cm}} = \underline{\hspace{2cm}}$$

Name: \_\_\_\_\_

**K-140**


Comparing  
(Longer/Shorter)

## Daily Word Problem



**Preview**  
Please log in to download  
the printable version of this worksheet.

How many   
long are the  ? \_\_\_\_\_

How many   
long is the  ? \_\_\_\_\_

Circle which is longer.