

Name: \_\_\_\_\_

**Daily Word Problem**

The Juarez family and the Gazer family both order the same size pizza.

The Juarez family cuts their pizza into eighths.

The Gazer family cuts their pizza into tenths.

Draw how each family cuts their pizza below.

Which family will get larger pieces?



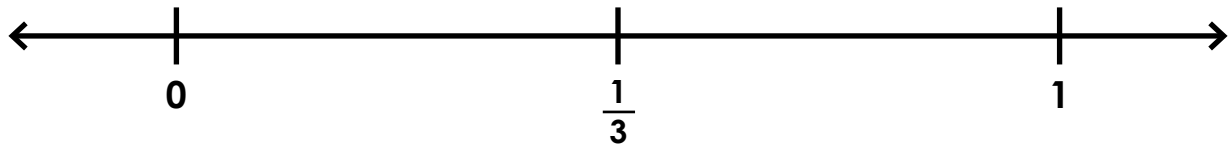
answer: \_\_\_\_\_



Name: \_\_\_\_\_


**Daily Word Problem**

Jamari's teacher asked him to mark the fraction  $\frac{1}{3}$  on the number line. His answer is below. He says he is correct because he drew three lines to show thirds.



Correct Jamari's answer on the number line below.

**Preview**  
Please log in to download the printable version of this worksheet.



Name: \_\_\_\_\_

## Daily Word Problem

Last week, Marlena walked for 30 minutes each day for 5 days. This week, she walked for 40 minutes each day for 6 days. How many minutes total did Marlena walk?

Show your work.



# Preview

Please log in to download the printable version of this worksheet.

answer: \_\_\_\_\_



Name: \_\_\_\_\_

## Daily Word Problem

Malachi drew a hexagon.

Each side was 6 centimeters in length.

What is the perimeter of Malachi's hexagon?

Show your work.



# Preview

Please log in to download the printable version of this worksheet.

answer: \_\_\_\_\_



Name: \_\_\_\_\_

## Daily Word Problem

Anika's mom drives her to school every morning.

She has to be at school at 8:30 a.m.


It takes 17 minutes to get to school.

What time do they have to leave the house in order to get to school by 8:30 a.m.?

Show your work.



answer: \_\_\_\_\_



Daily Word Problem

# Preview

Please log in to download  
the printable version of this worksheet.

