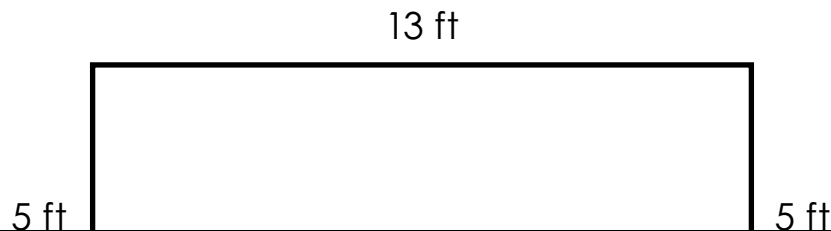


Name: _____

Daily Word Problem


Demir is planting a garden. He wants to put a fence around the perimeter of his garden to keep bunnies out.

His garden is shown below.



Preview

Please log in to download
the printable version of this worksheet.



answer: _____

Name: _____

Daily Word Problem

Logan baked 21 muffins.

He gave $\frac{1}{3}$ of the muffins to his neighbor.

Logan kept the rest of the muffins for himself.

How many muffins did Logan
give to his neighbor? _____

How many muffins did Logan



Preview


Please log in to download
the printable version of this worksheet.



Name: _____

Daily Word Problem

A summer camp is going on a field trip to an amusement park. There are 54 kids total in the camp. They divide into groups with 6 kids in each group. How many groups are there?

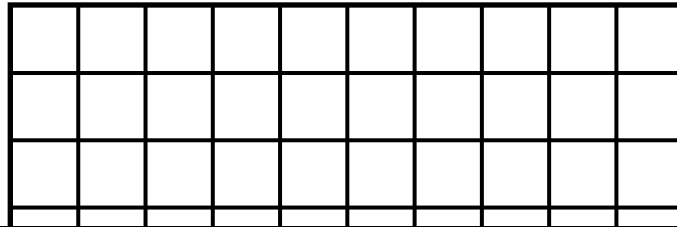
Show your work.

answer: _____

Name: _____

Daily Word Problem

Wen is making a small tray with tiles as a gift for her mother. The tiles are each 1 square centimeter. She makes 6 rows of 10 tiles.



Preview

Please log in to download
the printable version of this worksheet.



answer: _____

Name: _____

Daily Word Problem

Mr. McKensie just moved into a new house.

He needs a total of 18 new light bulbs to replace the ones in his house.

If the light bulbs are sold in packs of 4, how many packs will Mr. McKensie need to order? _____



Preview

Please log in to download the printable version of this worksheet.



Daily Word Problem

Preview

Please log in to download
the printable version of this worksheet.

