


Name: \_\_\_\_\_



# Math Buzz

Count on by hundreds.

50, 150, \_\_\_\_\_, \_\_\_\_\_, \_\_\_\_\_, \_\_\_\_\_, \_\_\_\_\_, 750, \_\_\_\_\_, \_\_\_\_\_

Fill in the missing months.

## Months of the Year

January

February

Zara, Wilson, and Angel were making a birthday book for their grandma. Zara colored 6 pages for the book, Wilson colored 4 pages, and Angel colored 5 pages. How many pages did they color in all?

Show your work



# Preview





Please log in to download the printable version of this worksheet.

July

August

October

December




26

- 5

25

- 7

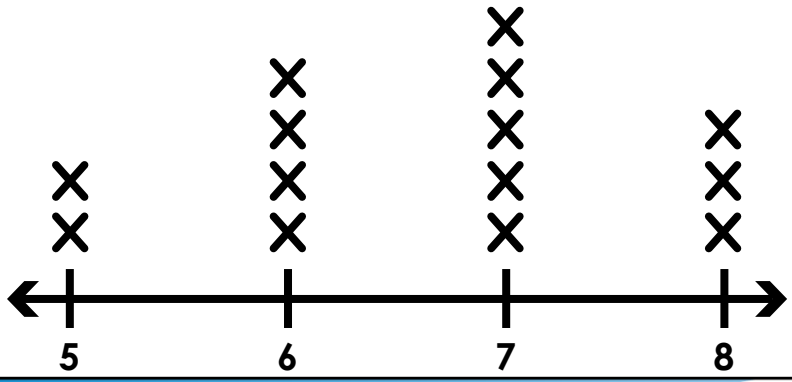


Name: \_\_\_\_\_

# Math Buzz

Use the line plot. How many trees are 6 feet tall?

key: X = 1 tree



Fill in the missing numbers.

**sixty-two**

\_\_\_\_\_ tens \_\_\_\_\_ ones

\_\_\_\_\_ + \_\_\_\_\_

\_\_\_\_\_

Complete the fact family.



# Preview


Please log in to download the printable version of this worksheet.

Show your work


answer: \_\_\_\_\_

_____	-	_____	=	_____
_____	-	_____	=	_____

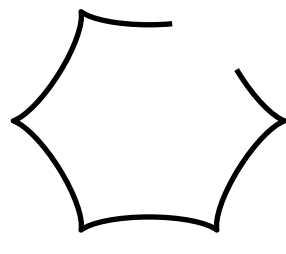
Label each shape as open or closed.




\_\_\_\_\_



\_\_\_\_\_




\_\_\_\_\_



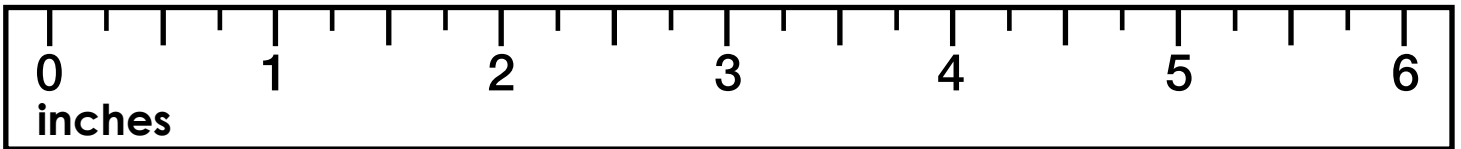
\_\_\_\_\_

Name: \_\_\_\_\_



# Math Buzz

Use the ruler to measure. How long is the feather?




answer: \_\_\_\_\_ inches



## Preview

Please log in to download the printable version of this worksheet.

Draw lines to divide each shape into equal fourths.




Dominic has 24 apps on his tablet. Haley has 17 apps on her tablet. How many more apps does Dominic have?

17	?
24	

\_\_\_\_\_ - \_\_\_\_\_ = \_\_\_\_\_

answer: \_\_\_\_\_ apps



Name: \_\_\_\_\_

# Math Buzz

Fill in the missing numbers.

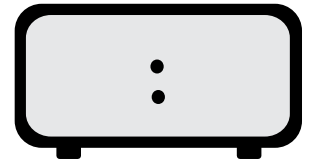
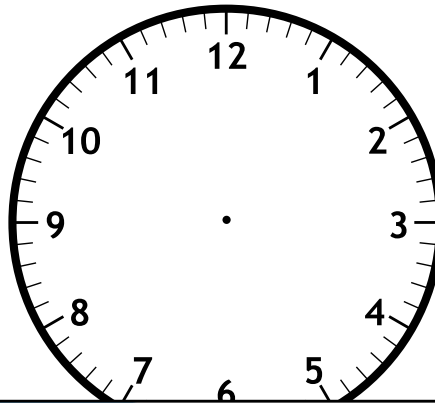
**ninety-seven**

\_\_\_\_\_ tens \_\_\_\_\_ ones

\_\_\_\_\_ + \_\_\_\_\_

\_\_\_\_\_

Mr. Tully gets to school at half past 7 every morning. Fill in the clocks to show what time Mr. Tully arrives at school.



Subtract.



# Preview

Please log in to download the printable version of this worksheet.

Draw 5 coins to show exactly 25¢.

--	--

15	
6	


	4
12	

Name: \_\_\_\_\_



# Math Buzz

Draw what shape comes next.



Add to continue the pattern.

$4 + 3 = \underline{\quad\quad}$        $4 + 33 = \underline{\quad\quad}$

Solve.

**Subtract 7 from 27.** \_\_\_\_\_



read 9 more pages. How many pages did Jade read all together?

?	
23	9

$\underline{\quad\quad} + \underline{\quad\quad} = \underline{\quad\quad}$

answer: \_\_\_\_\_ pages

## Preview

Please log in to download the printable version of this worksheet.

Favorite Ice Cream		Total
Vanilla	+++ III	
Chocolate	+++ +++	
Strawberry	+++ I	

How many children chose chocolate? \_\_\_\_\_

How many children chose strawberry? \_\_\_\_\_



Count on by hundreds.

50, 150, 250, 350,  
450, 550, 650,  
750, 850, 950

Subtract.

$$\begin{array}{r} 26 \\ - 5 \\ \hline 21 \end{array}$$

$$\begin{array}{r} 115 \\ - 25 \\ \hline 90 \end{array}$$

Zara, Wilson, and Angel were making a birthday book for their grandma. Zara colored 6 pages for the book, Wilson colored 4 pages, and Angel colored 5 pages. How many pages did they color in all?

$6 + 4 + 5 = 15$

answer: 15 pages

Fill in the missing months.

Months of the Year
January
February
<u>March</u>
April
May
<u>June</u>
July
August
<u>September</u>
October
<u>November</u>
December

Circle the shapes that have equal fourths.

Use the line plot. How many trees are 6 feet tall?

key: X = 1 tree

Fill in the missing numbers.

sixty - two

$$\begin{array}{r} 6 \text{ tens } 2 \text{ ones} \\ 60 + 2 \\ \hline 62 \end{array}$$

Karina had 2 quarters, 1 dime, and 4 pennies in her purse. How much does Karina have?

25¢ 25¢ 10¢  
1¢ 1¢ 1¢ 1¢

$25 + 25 + 10 + 1 + 1 + 1 + 1 = 64$

Complete the fact family.

Label each shape as open or closed.

closed open



# Preview

Please log in to download the printable version of this worksheet.

Answers may vary.

Fill in the missing numbers.

ninety - seven

$$\begin{array}{r} 9 \text{ tens } 7 \text{ ones} \\ 90 + 7 \\ \hline 97 \end{array}$$

Mr. Tully gets to school at half past 7 every morning. Fill in the clocks to show what time Mr. Tully arrives at school.

Subtract.

 $30 - 10 = 20$ 
 $26 - 9 = 17$ 
 $22 - 8 = 14$ 

Draw 5 coins to show exactly 25¢.

5¢ 5¢ 5¢  
5¢ 5¢

Fill in the missing numbers.

19	
10	9
15	
6	9
8	4
12	

Draw what shape comes next.

△△○○△△○○△△○

Add to continue the pattern.

 $4 + 3 = 7$ 
 $4 + 13 = 17$ 
 $4 + 23 = 27$ 
 $4 + 33 = 37$ 
 $4 + 43 = 47$ 
 $4 + 53 = 57$ 

Solve.

Subtract 7 from 27. 20

Find the difference between 21 and 6. 15

Jade read 23 pages of her book before dinner. After dinner she read 9 more pages. How many pages did Jade read all together?

?	
23	9

$23 + 9 = 32$

answer: 32 pages

Complete the tally chart. Use the tally chart to answer the questions below.

How many children chose chocolate? 10

How many children chose strawberry? 6