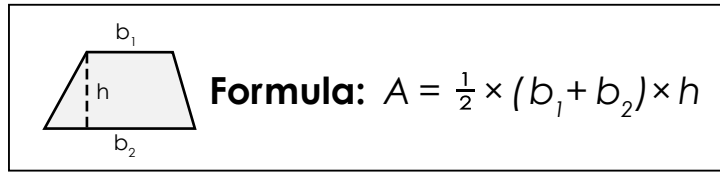
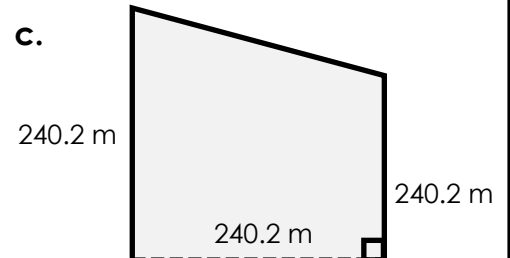
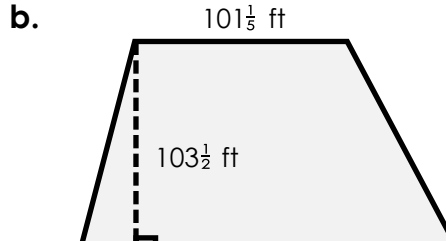
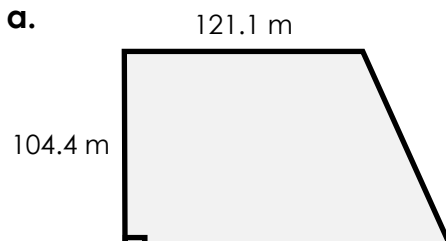


Name: _____

Area of a Trapezoid



Find the area of each trapezoid.

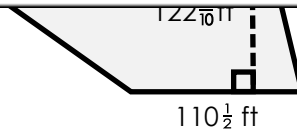


Preview

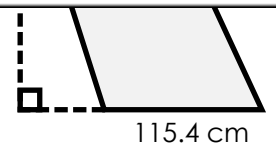
Please log in to download the printable version of this worksheet.



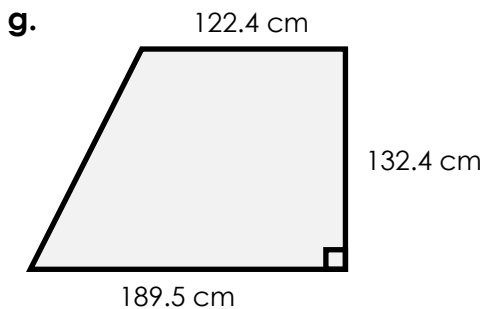
area = _____



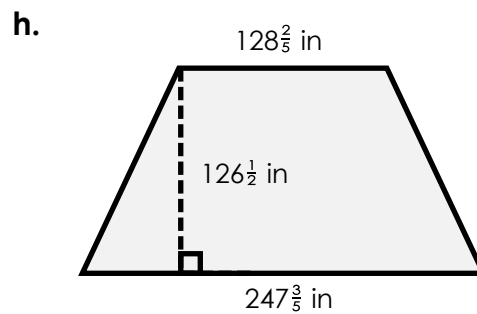
area = _____



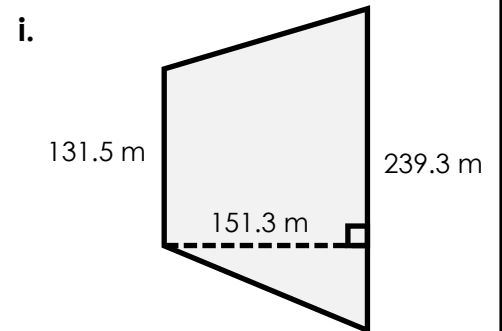
area = _____



area = _____



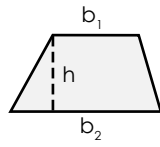
area = _____



area = _____

ANSWER KEY

Area of a Trapezoid



Formula: $A = \frac{1}{2} \times (b_1 + b_2) \times h$

Find the area of each trapezoid.


a.

121.1 m



b.

$101\frac{1}{3}$ ft



c.

240.2 m



Preview

Please log in to download
the printable version of this worksheet.

